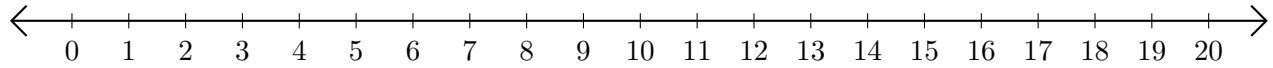


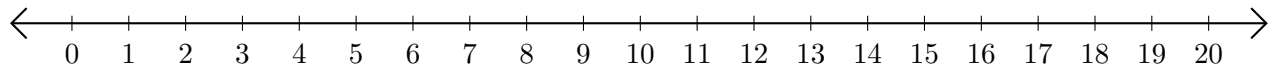
# Adding on Number Lines (C)

Use the number lines to calculate each sum.

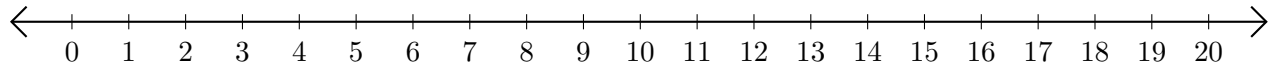
1.  $17 + 2 = \underline{\quad}$



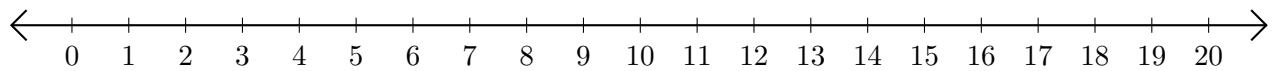
2.  $5 + 12 = \underline{\quad}$



3.  $15 + 3 = \underline{\quad}$



4.  $9 + 10 = \underline{\quad}$



5.  $19 + 1 = \underline{\quad}$

