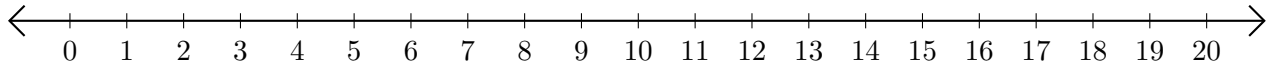


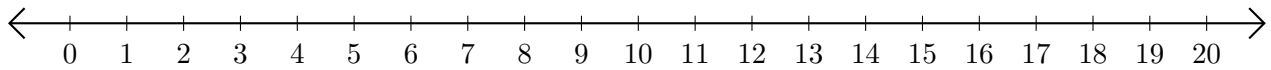
# Adding on Number Lines (D)

Use the number lines to calculate each sum.

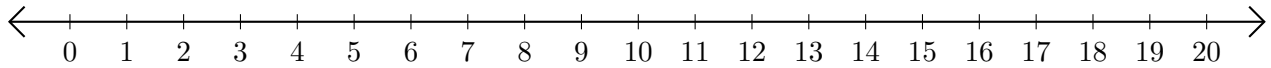
1.  $4 + 12 = \underline{\quad}$



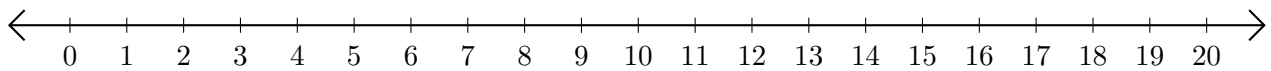
2.  $6 + 1 = \underline{\quad}$



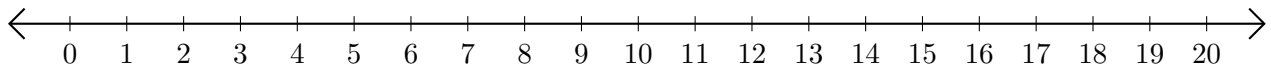
3.  $15 + 5 = \underline{\quad}$



4.  $7 + 1 = \underline{\quad}$



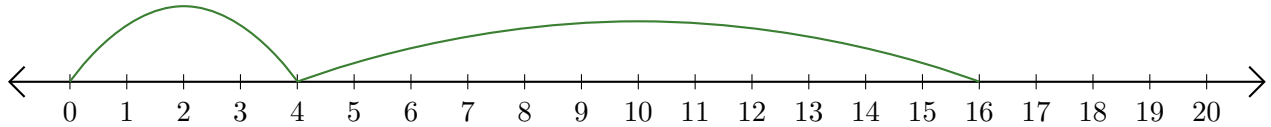
5.  $5 + 11 = \underline{\quad}$



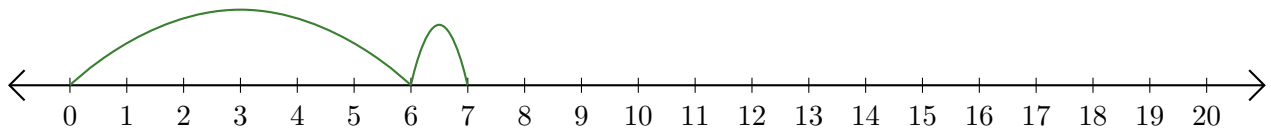
# Adding on Number Lines (D) Answers

Use the number lines to calculate each sum.

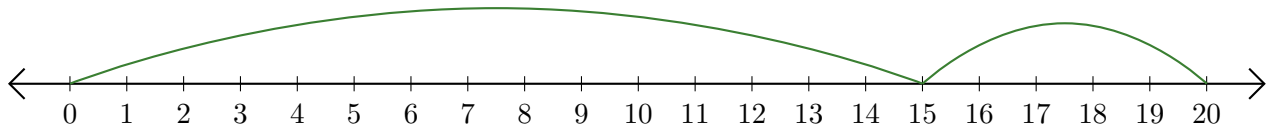
1.  $4 + 12 = \underline{16}$



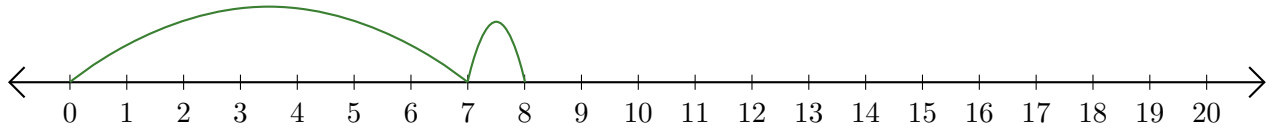
2.  $6 + 1 = \underline{7}$



3.  $15 + 5 = \underline{20}$



4.  $7 + 1 = \underline{8}$



5.  $5 + 11 = \underline{16}$

