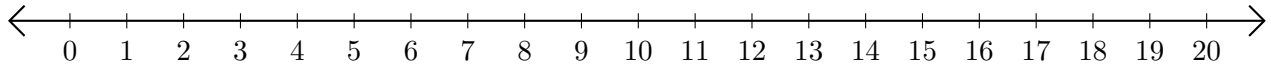


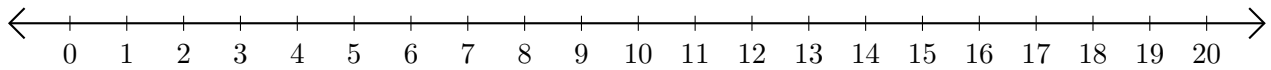
Adding on Number Lines (E)

Use the number lines to calculate each sum.

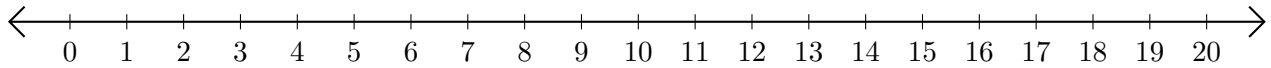
1. $14 + 3 = \underline{\quad}$



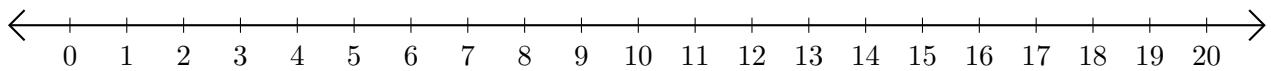
2. $3 + 1 = \underline{\quad}$



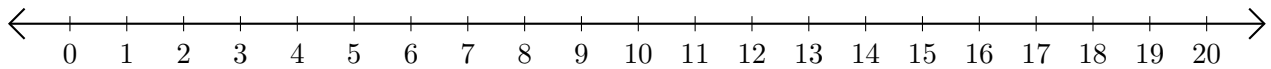
3. $9 + 10 = \underline{\quad}$



4. $1 + 4 = \underline{\quad}$



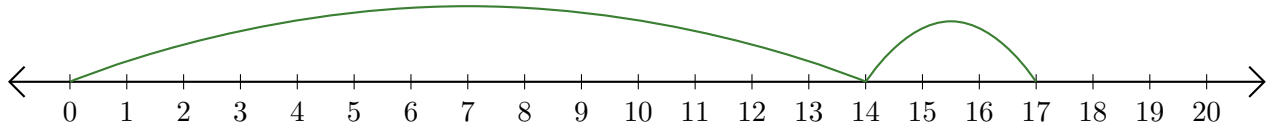
5. $5 + 9 = \underline{\quad}$



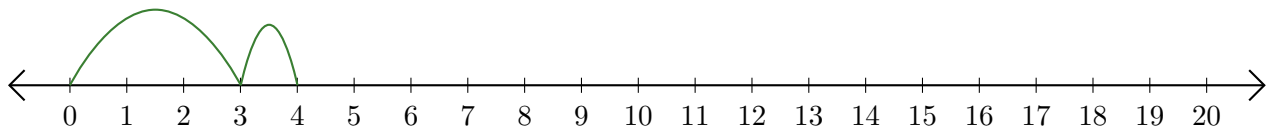
Adding on Number Lines (E) Answers

Use the number lines to calculate each sum.

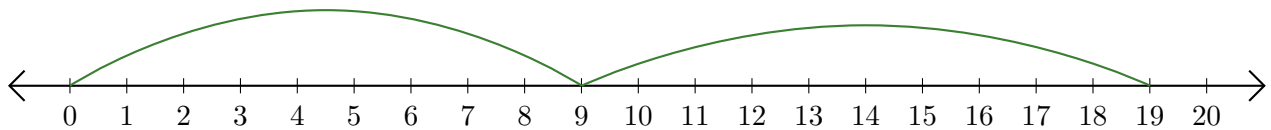
1. $14 + 3 = \underline{17}$



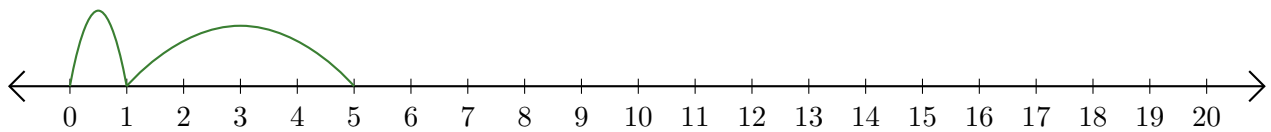
2. $3 + 1 = \underline{4}$



3. $9 + 10 = \underline{19}$



4. $1 + 4 = \underline{5}$



5. $5 + 9 = \underline{14}$

