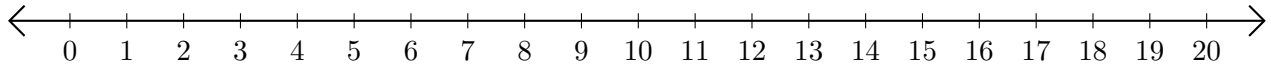


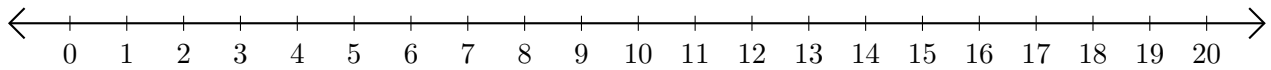
Adding on Number Lines (F)

Use the number lines to calculate each sum.

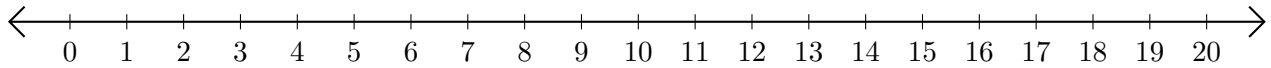
1. $18 + 2 = \underline{\quad}$



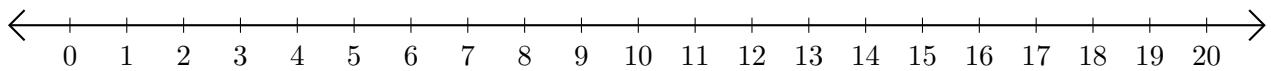
2. $2 + 13 = \underline{\quad}$



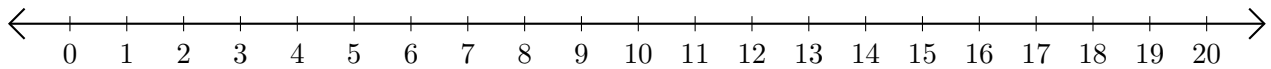
3. $14 + 5 = \underline{\quad}$



4. $16 + 2 = \underline{\quad}$



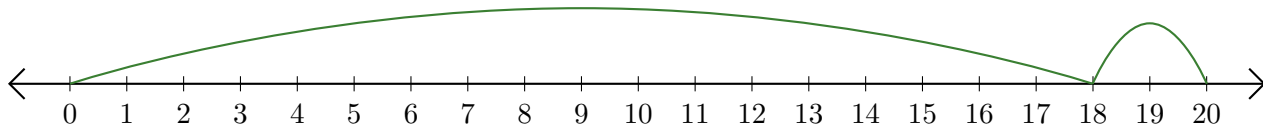
5. $9 + 1 = \underline{\quad}$



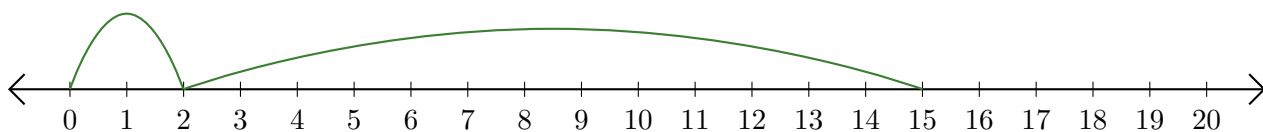
Adding on Number Lines (F) Answers

Use the number lines to calculate each sum.

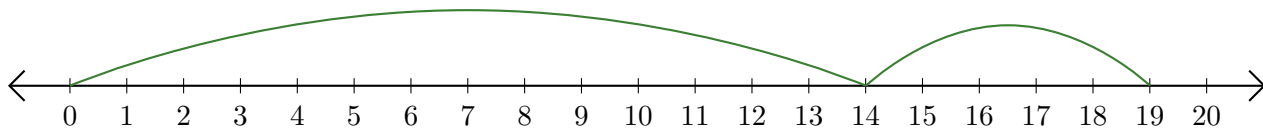
1. $18 + 2 = \underline{20}$



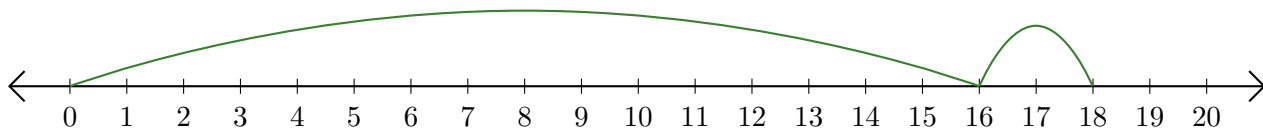
2. $2 + 13 = \underline{15}$



3. $14 + 5 = \underline{19}$



4. $16 + 2 = \underline{18}$



5. $9 + 1 = \underline{10}$

