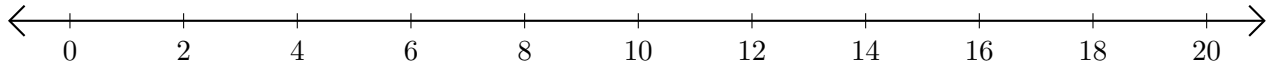


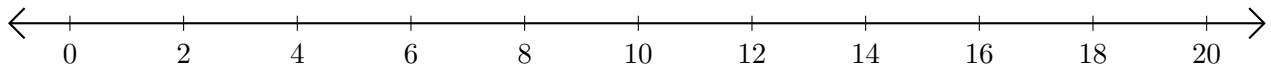
Adding on Number Lines (A)

Use the number lines to calculate each sum.

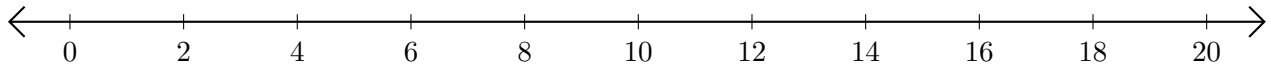
1. $4 + 8 = \underline{\quad}$



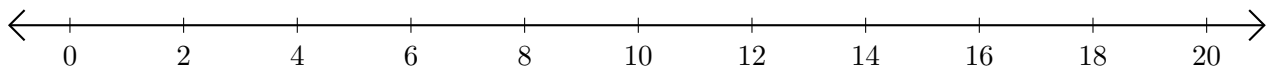
2. $6 + 10 = \underline{\quad}$



3. $8 + 12 = \underline{\quad}$



4. $10 + 8 = \underline{\quad}$



5. $18 + 2 = \underline{\quad}$

