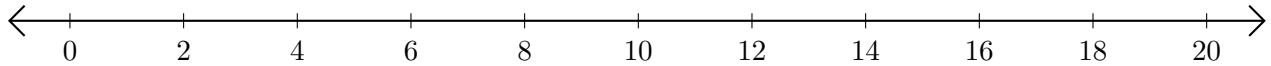


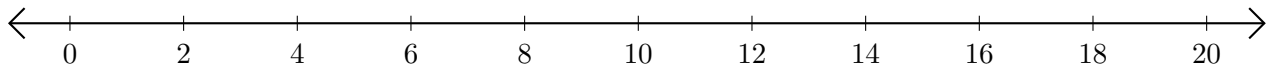
Adding on Number Lines (E)

Use the number lines to calculate each sum.

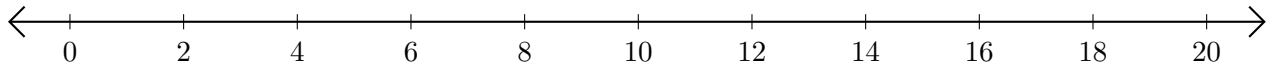
1. $4 + 4 = \underline{\quad}$



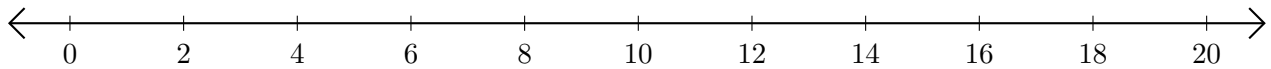
2. $14 + 4 = \underline{\quad}$



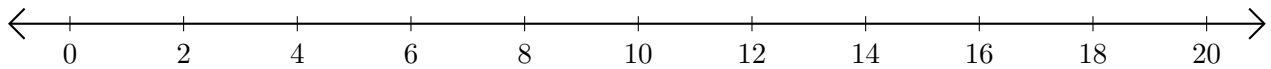
3. $12 + 6 = \underline{\quad}$



4. $16 + 4 = \underline{\quad}$



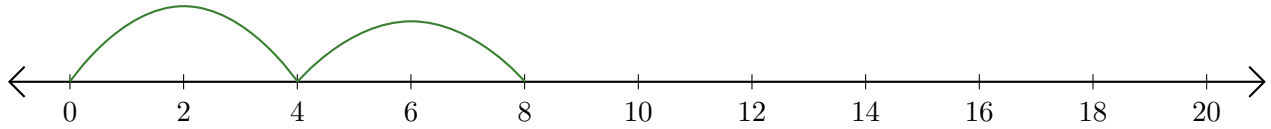
5. $18 + 2 = \underline{\quad}$



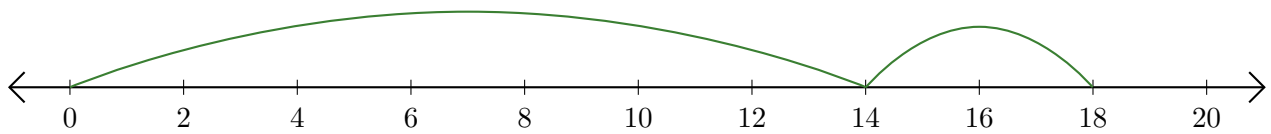
Adding on Number Lines (E) Answers

Use the number lines to calculate each sum.

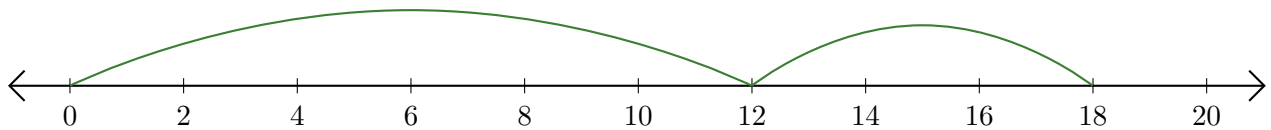
1. $4 + 4 = \underline{8}$



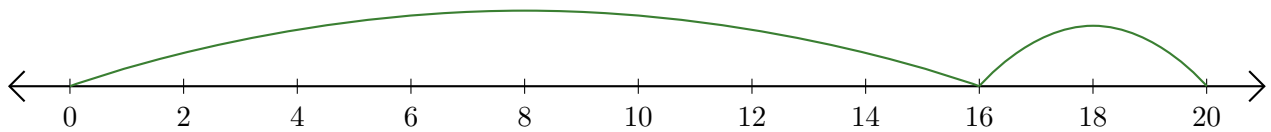
2. $14 + 4 = \underline{18}$



3. $12 + 6 = \underline{18}$



4. $16 + 4 = \underline{20}$



5. $18 + 2 = \underline{20}$

