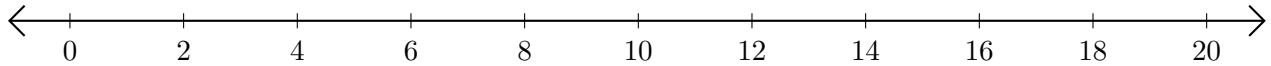


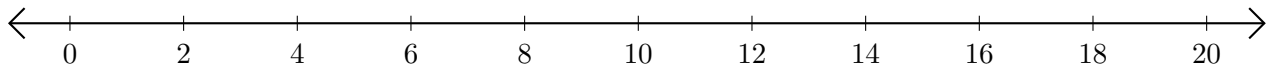
# Adding on Number Lines (E)

Use the number lines to calculate each sum.

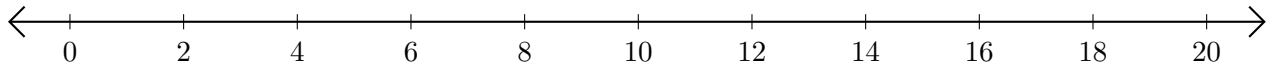
1.  $4 + 4 = \underline{\quad}$



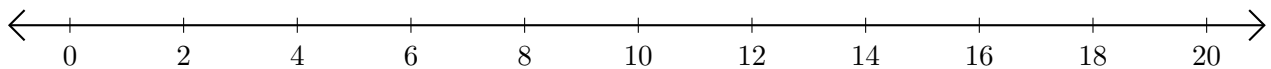
2.  $14 + 4 = \underline{\quad}$



3.  $12 + 6 = \underline{\quad}$



4.  $16 + 4 = \underline{\quad}$



5.  $18 + 2 = \underline{\quad}$

