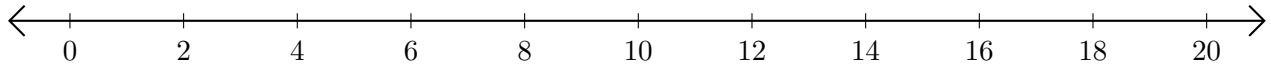


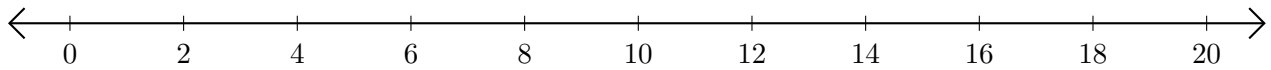
Adding on Number Lines (F)

Use the number lines to calculate each sum.

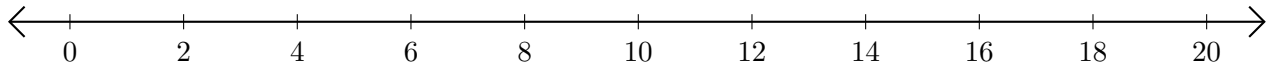
1. $6 + 14 = \underline{\quad}$



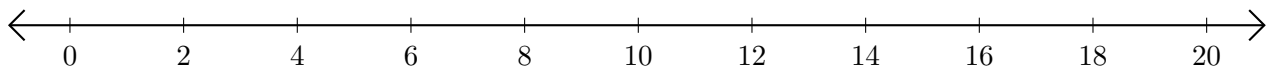
2. $16 + 4 = \underline{\quad}$



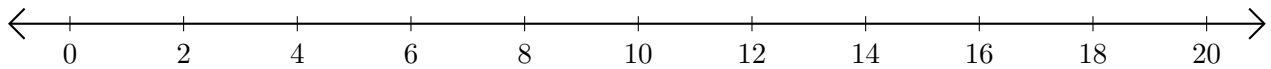
3. $18 + 2 = \underline{\quad}$



4. $10 + 6 = \underline{\quad}$



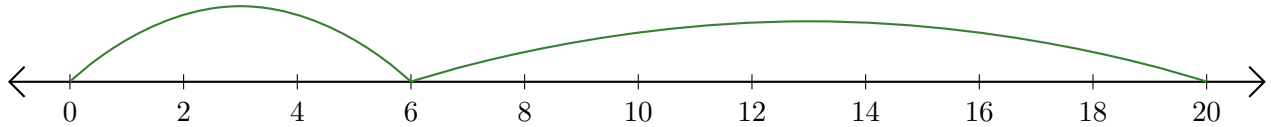
5. $8 + 12 = \underline{\quad}$



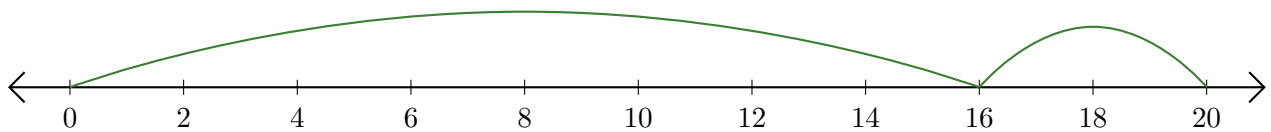
Adding on Number Lines (F) Answers

Use the number lines to calculate each sum.

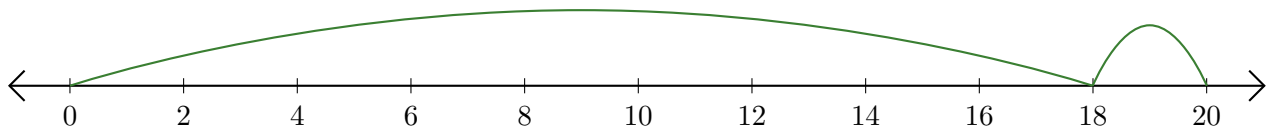
1. $6 + 14 = \underline{20}$



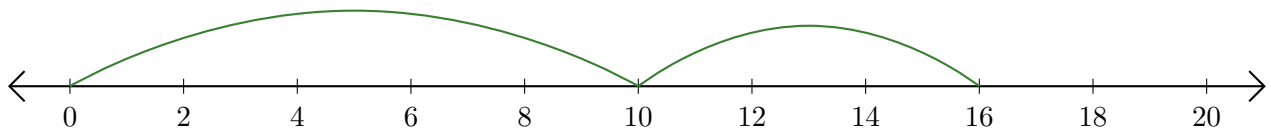
2. $16 + 4 = \underline{20}$



3. $18 + 2 = \underline{20}$



4. $10 + 6 = \underline{16}$



5. $8 + 12 = \underline{20}$

