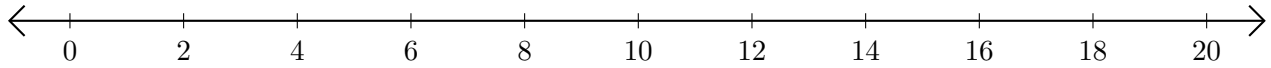


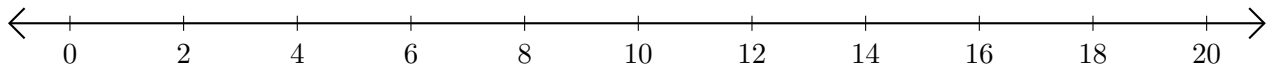
Adding on Number Lines (G)

Use the number lines to calculate each sum.

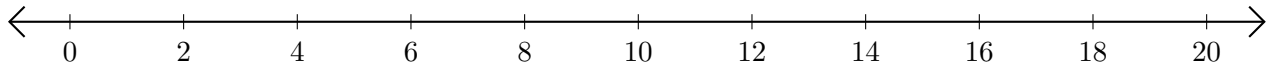
1. $4 + 10 = \underline{\quad}$



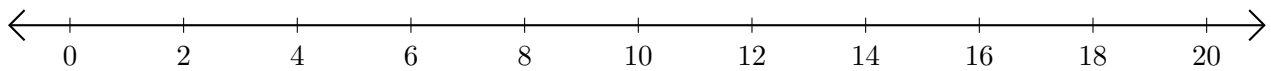
2. $16 + 2 = \underline{\quad}$



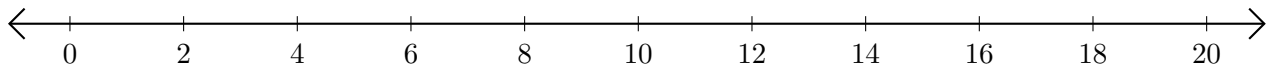
3. $8 + 6 = \underline{\quad}$



4. $18 + 2 = \underline{\quad}$



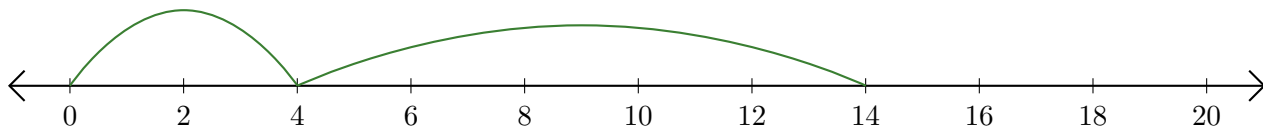
5. $6 + 14 = \underline{\quad}$



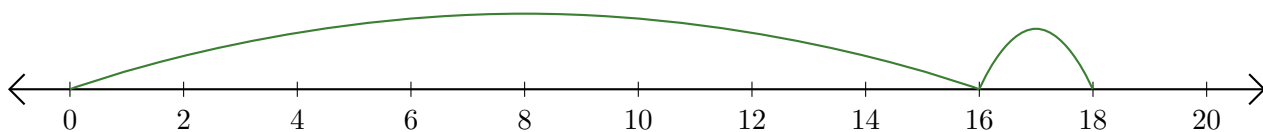
Adding on Number Lines (G) Answers

Use the number lines to calculate each sum.

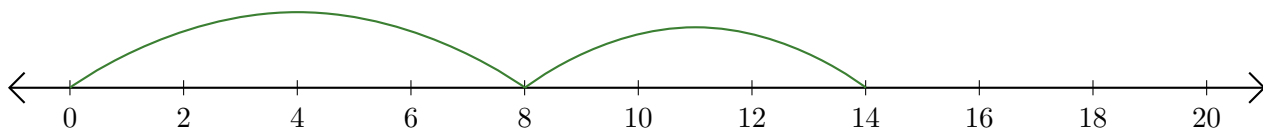
1. $4 + 10 = \underline{14}$



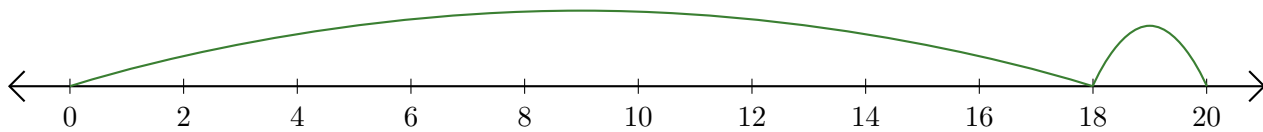
2. $16 + 2 = \underline{18}$



3. $8 + 6 = \underline{14}$



4. $18 + 2 = \underline{20}$



5. $6 + 14 = \underline{20}$

