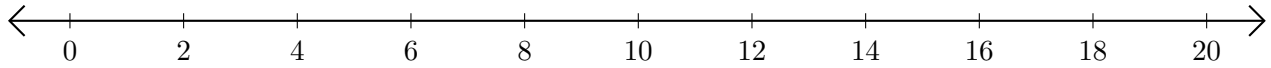


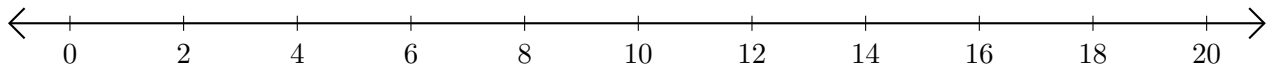
# Adding on Number Lines (G)

Use the number lines to calculate each sum.

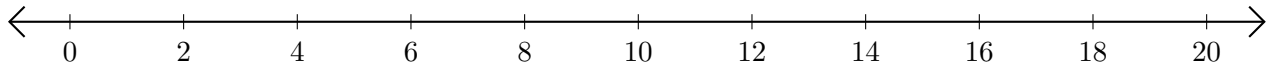
1.  $4 + 10 = \underline{\quad}$



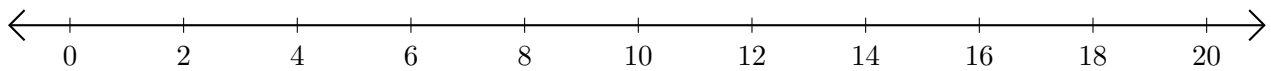
2.  $16 + 2 = \underline{\quad}$



3.  $8 + 6 = \underline{\quad}$



4.  $18 + 2 = \underline{\quad}$



5.  $6 + 14 = \underline{\quad}$

