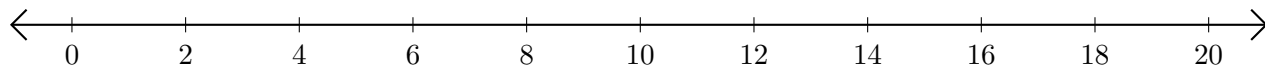


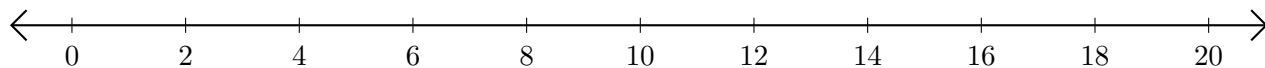
# Adding on Number Lines (I)

Use the number lines to calculate each sum.

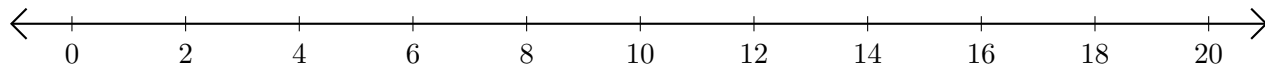
1.  $6 + 10 = \underline{\quad}$



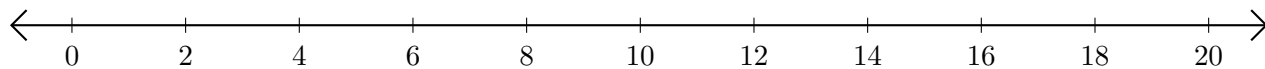
2.  $4 + 6 = \underline{\quad}$



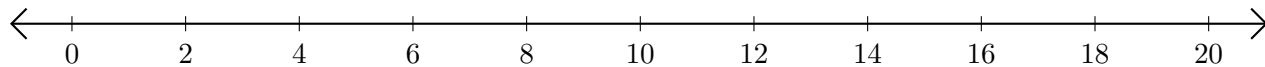
3.  $12 + 4 = \underline{\quad}$



4.  $2 + 16 = \underline{\quad}$



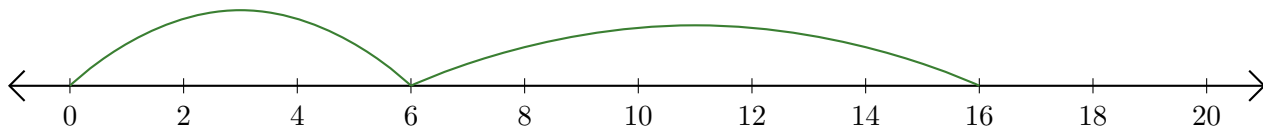
5.  $16 + 4 = \underline{\quad}$



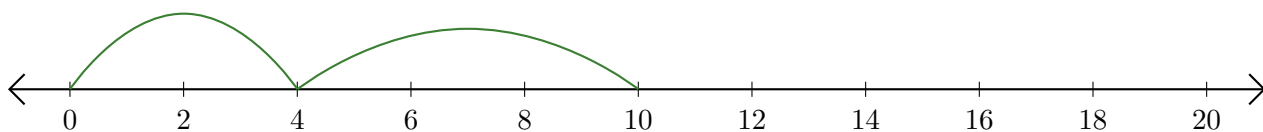
# Adding on Number Lines (I) Answers

Use the number lines to calculate each sum.

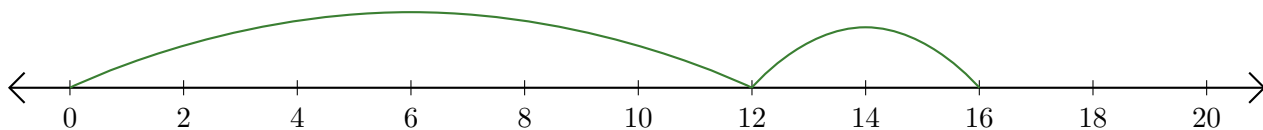
1.  $6 + 10 = \underline{16}$



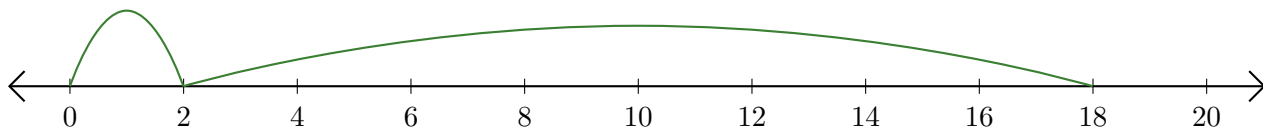
2.  $4 + 6 = \underline{10}$



3.  $12 + 4 = \underline{16}$



4.  $2 + 16 = \underline{18}$



5.  $16 + 4 = \underline{20}$

