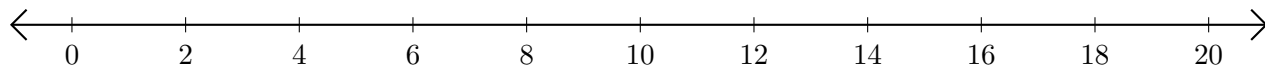


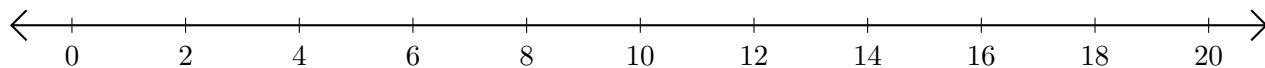
Adding on Number Lines (I)

Use the number lines to calculate each sum.

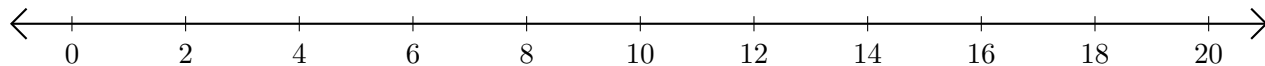
1. $6 + 10 = \underline{\quad}$



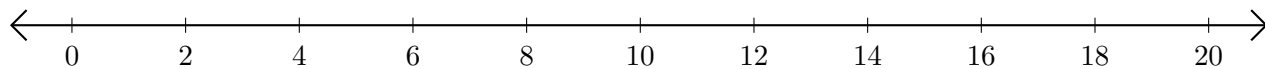
2. $4 + 6 = \underline{\quad}$



3. $12 + 4 = \underline{\quad}$



4. $2 + 16 = \underline{\quad}$



5. $16 + 4 = \underline{\quad}$

