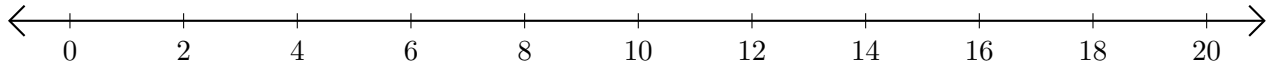


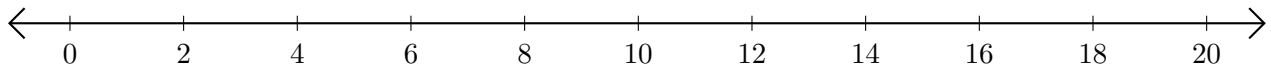
Adding on Number Lines (J)

Use the number lines to calculate each sum.

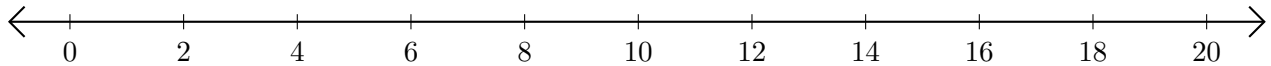
1. $18 + 2 = \underline{\quad}$



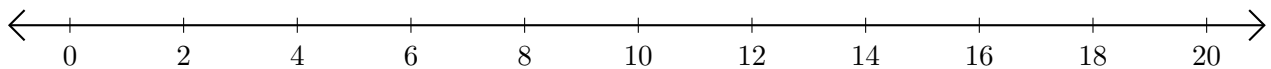
2. $6 + 8 = \underline{\quad}$



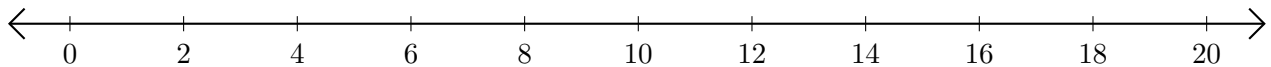
3. $12 + 6 = \underline{\quad}$



4. $16 + 2 = \underline{\quad}$



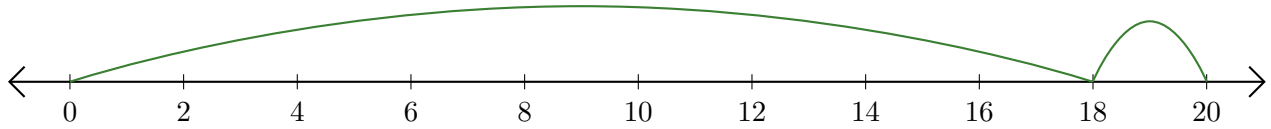
5. $4 + 4 = \underline{\quad}$



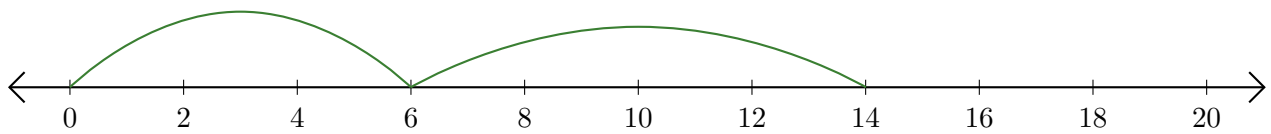
Adding on Number Lines (J) Answers

Use the number lines to calculate each sum.

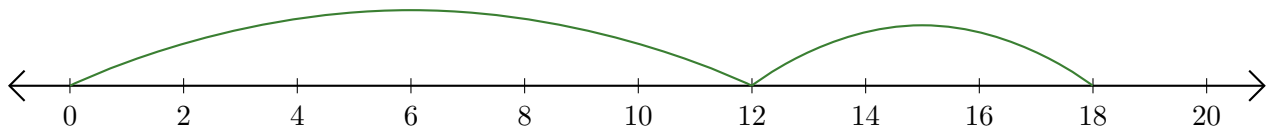
1. $18 + 2 = \underline{20}$



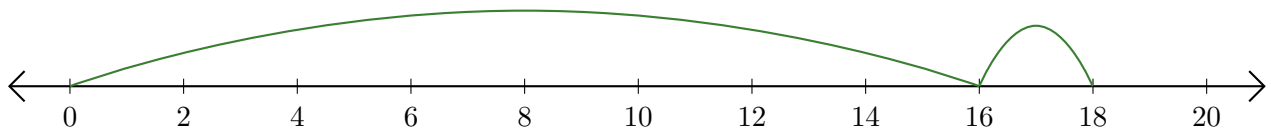
2. $6 + 8 = \underline{14}$



3. $12 + 6 = \underline{18}$



4. $16 + 2 = \underline{18}$



5. $4 + 4 = \underline{8}$

