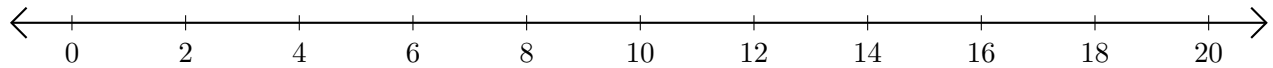


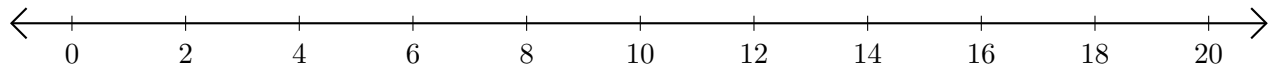
Adding on Number Lines (J)

Use the number lines to calculate each sum.

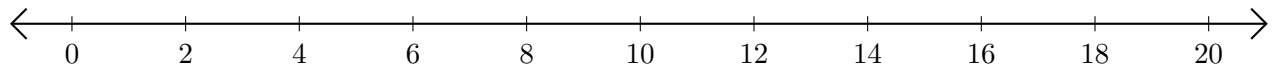
1. $18 + 2 = \underline{\quad}$



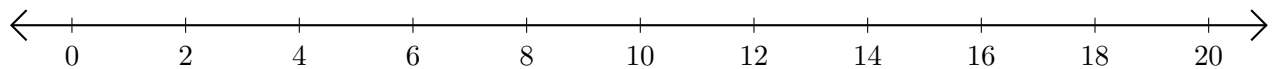
2. $6 + 8 = \underline{\quad}$



3. $12 + 6 = \underline{\quad}$



4. $16 + 2 = \underline{\quad}$



5. $4 + 4 = \underline{\quad}$

