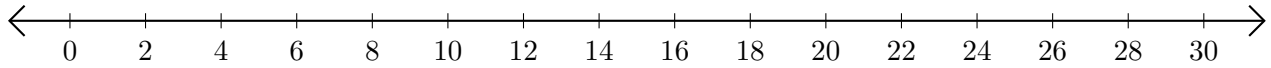


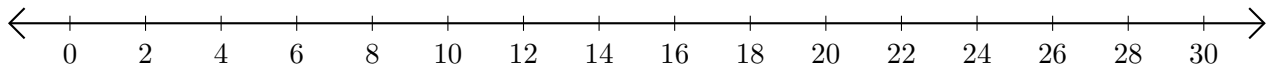
Adding on Number Lines (A)

Use the number lines to calculate each sum.

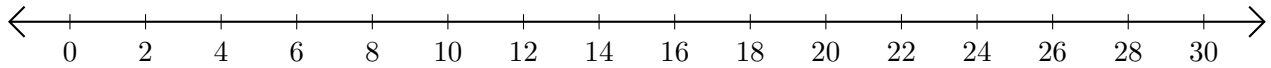
1. $26 + 2 = \underline{\quad}$



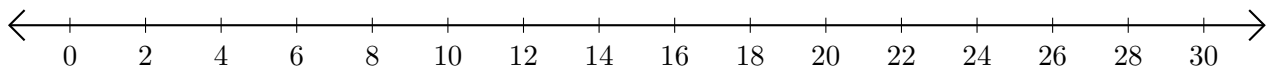
2. $8 + 20 = \underline{\quad}$



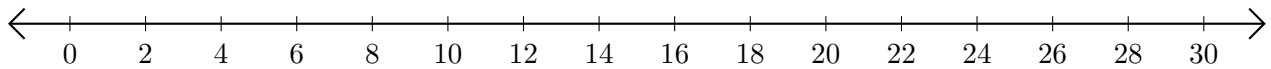
3. $20 + 2 = \underline{\quad}$



4. $22 + 2 = \underline{\quad}$



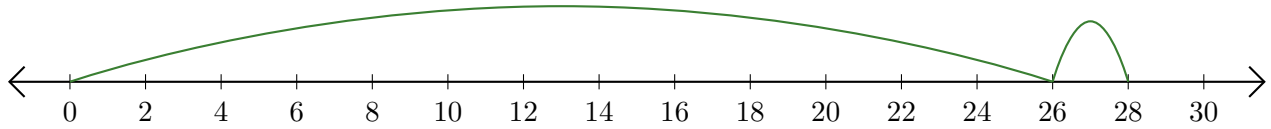
5. $18 + 12 = \underline{\quad}$



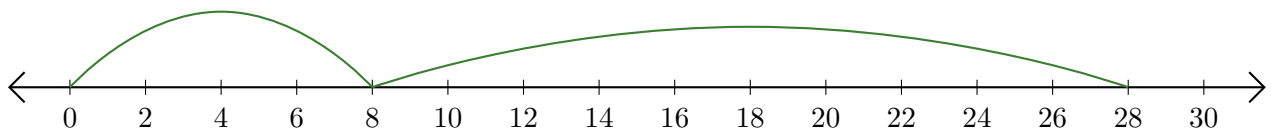
Adding on Number Lines (A) Answers

Use the number lines to calculate each sum.

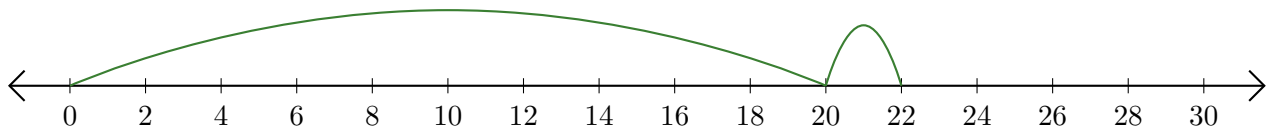
1. $26 + 2 = \underline{28}$



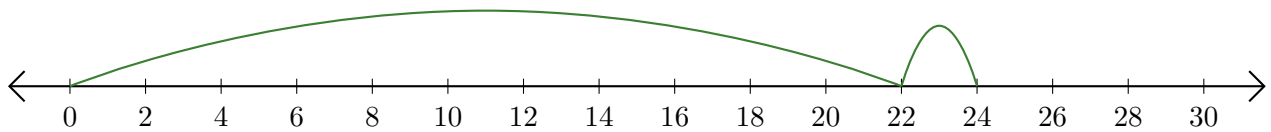
2. $8 + 20 = \underline{28}$



3. $20 + 2 = \underline{22}$



4. $22 + 2 = \underline{24}$



5. $18 + 12 = \underline{30}$

