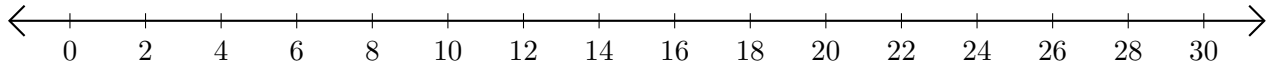


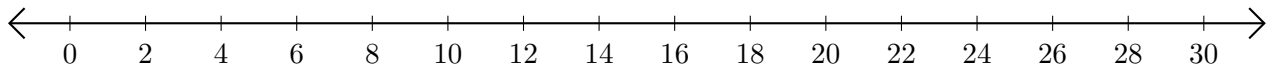
# Adding on Number Lines (A)

Use the number lines to calculate each sum.

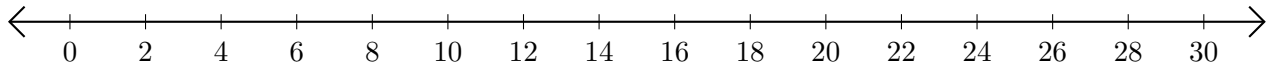
1.  $26 + 2 = \underline{\quad}$



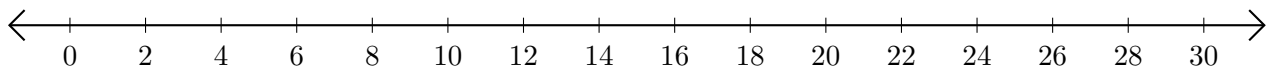
2.  $8 + 20 = \underline{\quad}$



3.  $20 + 2 = \underline{\quad}$



4.  $22 + 2 = \underline{\quad}$



5.  $18 + 12 = \underline{\quad}$

