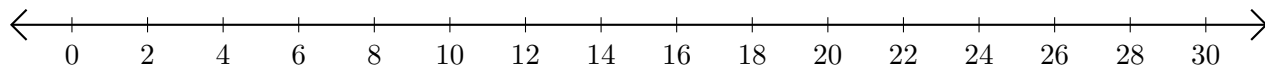


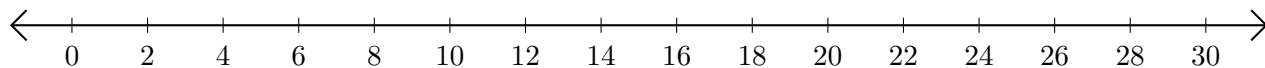
Adding on Number Lines (B)

Use the number lines to calculate each sum.

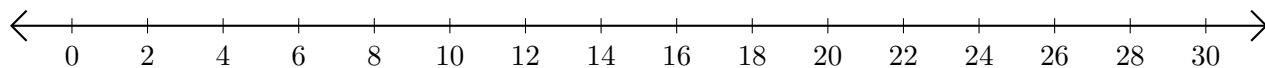
1. $18 + 12 = \underline{\quad}$



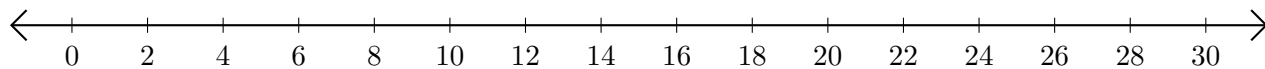
2. $14 + 8 = \underline{\quad}$



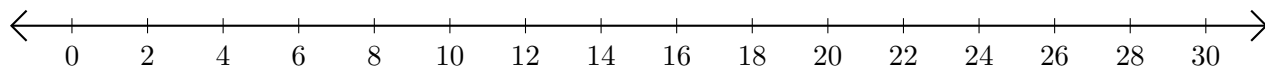
3. $6 + 4 = \underline{\quad}$



4. $22 + 8 = \underline{\quad}$



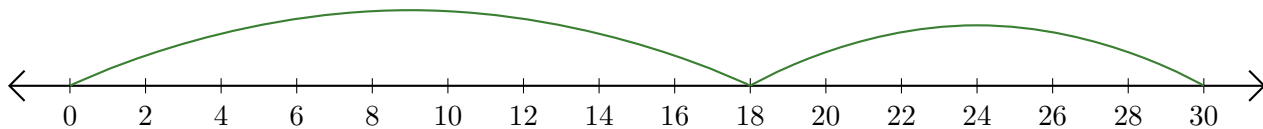
5. $16 + 14 = \underline{\quad}$



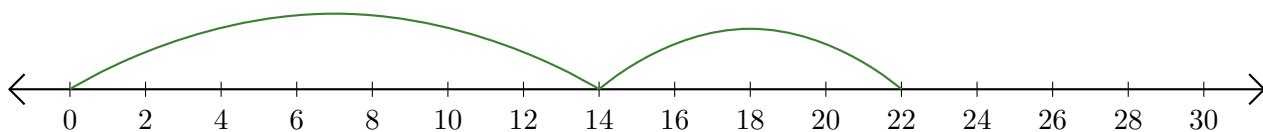
Adding on Number Lines (B) Answers

Use the number lines to calculate each sum.

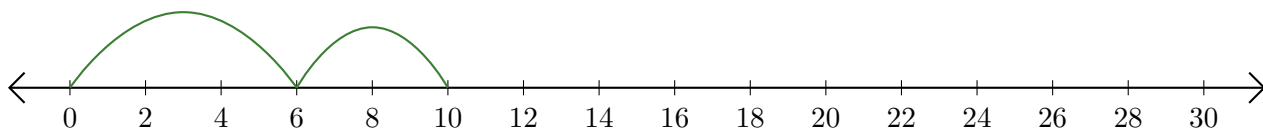
1. $18 + 12 = \underline{30}$



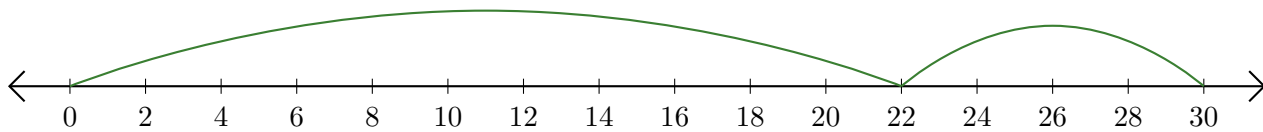
2. $14 + 8 = \underline{22}$



3. $6 + 4 = \underline{10}$



4. $22 + 8 = \underline{30}$



5. $16 + 14 = \underline{30}$

