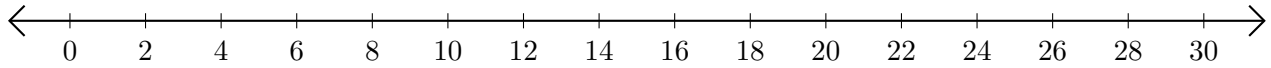


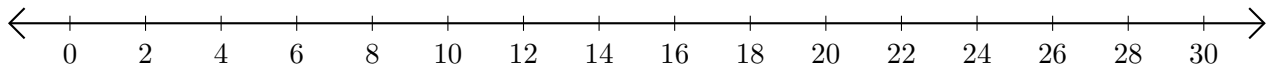
# Adding on Number Lines (D)

Use the number lines to calculate each sum.

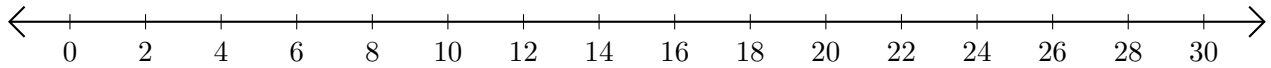
1.  $16 + 6 = \underline{\quad}$



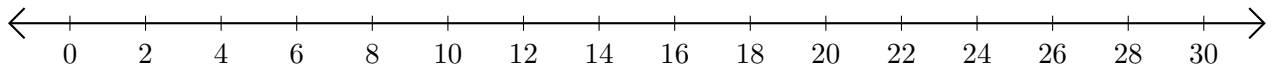
2.  $22 + 4 = \underline{\quad}$



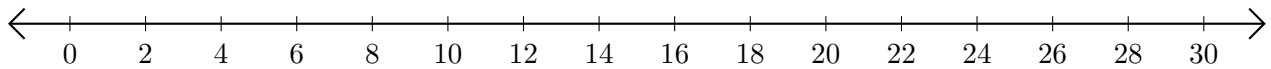
3.  $14 + 8 = \underline{\quad}$



4.  $28 + 2 = \underline{\quad}$



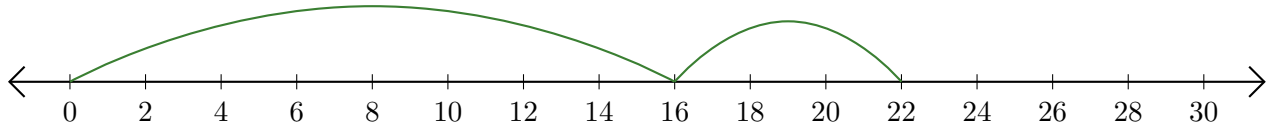
5.  $26 + 4 = \underline{\quad}$



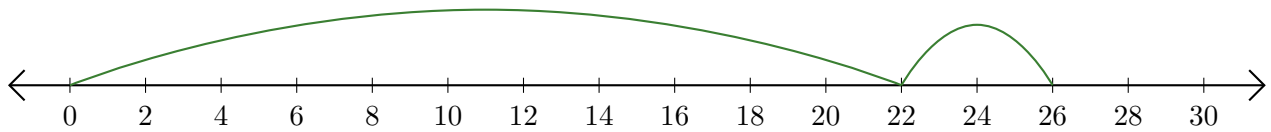
# Adding on Number Lines (D) Answers

Use the number lines to calculate each sum.

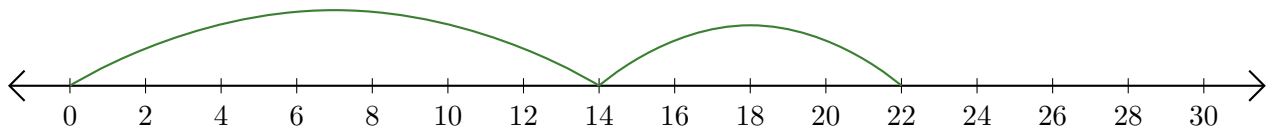
1.  $16 + 6 = \underline{22}$



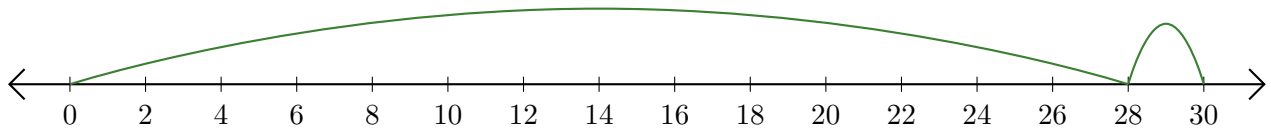
2.  $22 + 4 = \underline{26}$



3.  $14 + 8 = \underline{22}$



4.  $28 + 2 = \underline{30}$



5.  $26 + 4 = \underline{30}$

