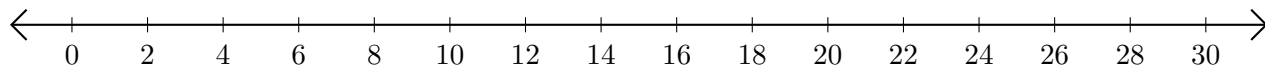


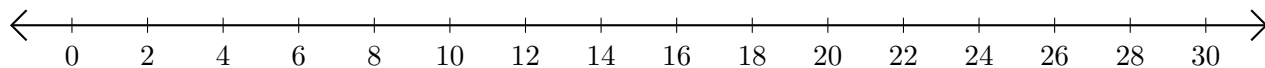
Adding on Number Lines (G)

Use the number lines to calculate each sum.

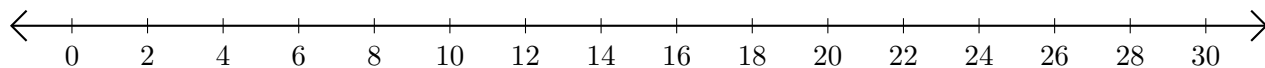
1. $20 + 8 = \underline{\quad}$



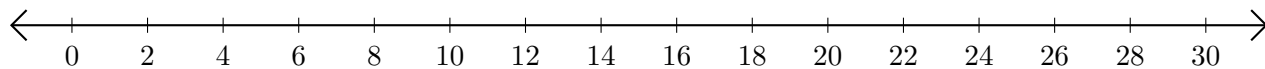
2. $24 + 6 = \underline{\quad}$



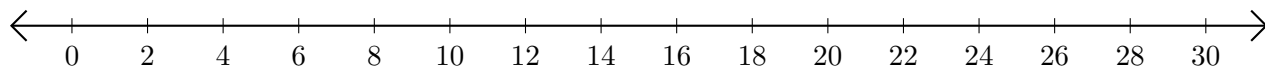
3. $28 + 2 = \underline{\quad}$



4. $14 + 8 = \underline{\quad}$



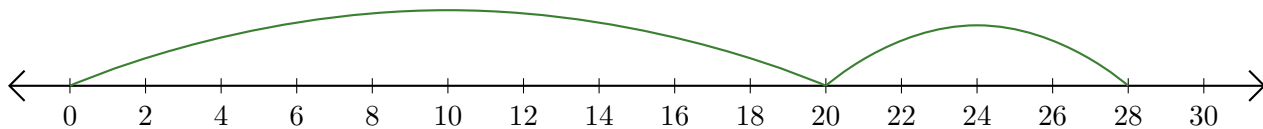
5. $16 + 12 = \underline{\quad}$



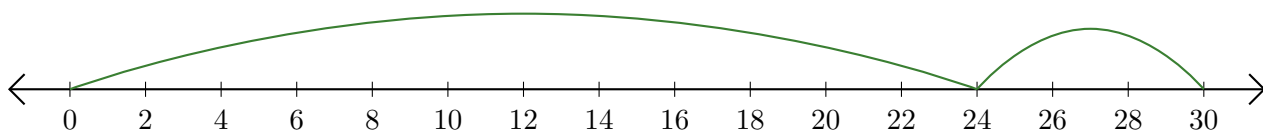
Adding on Number Lines (G) Answers

Use the number lines to calculate each sum.

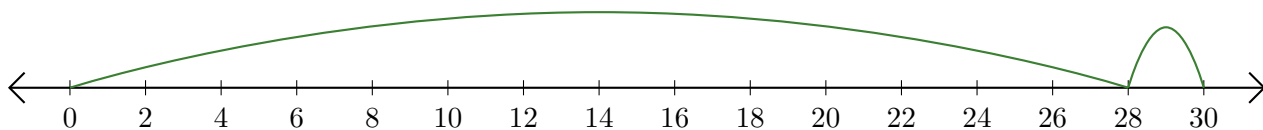
1. $20 + 8 = \underline{28}$



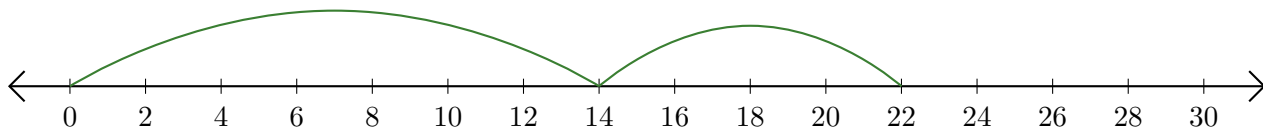
2. $24 + 6 = \underline{30}$



3. $28 + 2 = \underline{30}$



4. $14 + 8 = \underline{22}$



5. $16 + 12 = \underline{28}$

