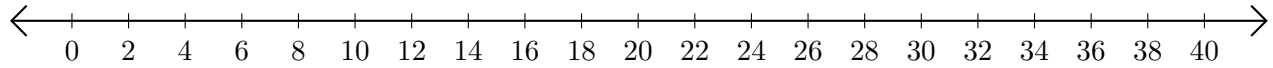


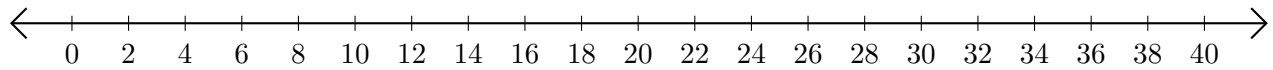
Adding on Number Lines (A)

Use the number lines to calculate each sum.

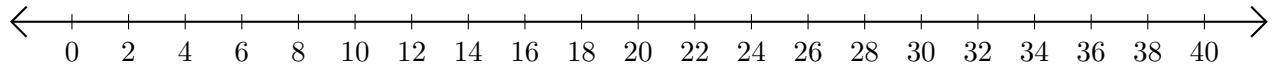
1. $38 + 2 = \underline{\quad}$



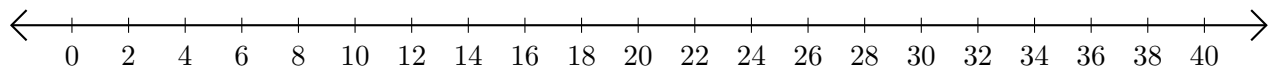
2. $30 + 10 = \underline{\quad}$



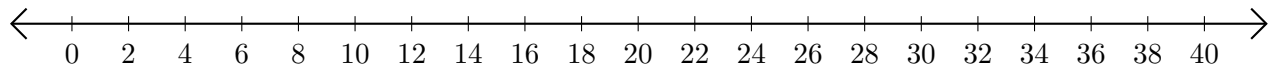
3. $2 + 2 = \underline{\quad}$



4. $18 + 12 = \underline{\quad}$



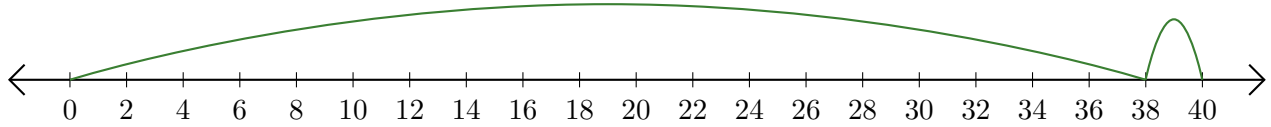
5. $14 + 22 = \underline{\quad}$



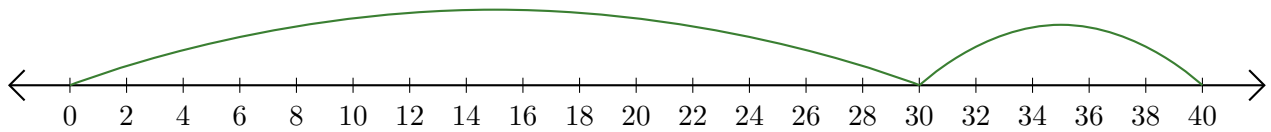
Adding on Number Lines (A) Answers

Use the number lines to calculate each sum.

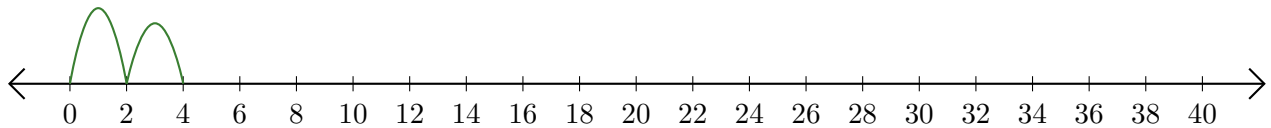
1. $38 + 2 = \underline{40}$



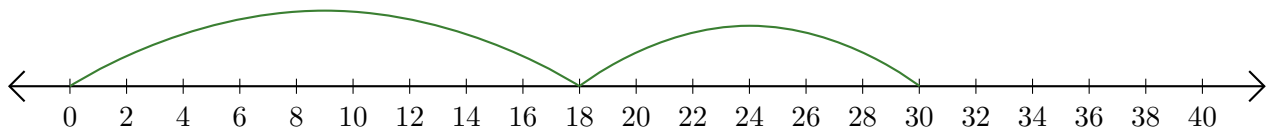
2. $30 + 10 = \underline{40}$



3. $2 + 2 = \underline{4}$



4. $18 + 12 = \underline{30}$



5. $14 + 22 = \underline{36}$

