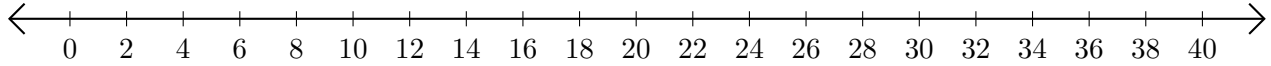


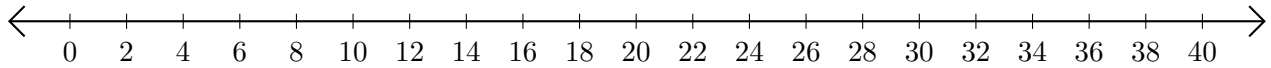
Adding on Number Lines (E)

Use the number lines to calculate each sum.

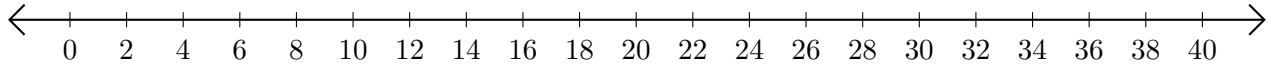
1. $30 + 10 = \underline{\quad}$



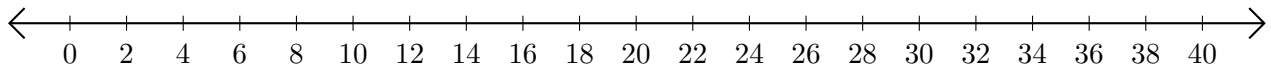
2. $16 + 20 = \underline{\quad}$



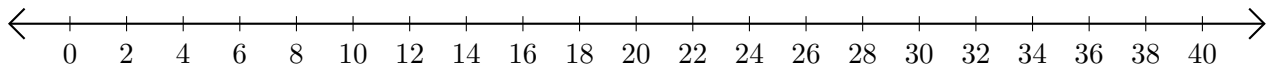
3. $8 + 4 = \underline{\quad}$



4. $6 + 24 = \underline{\quad}$



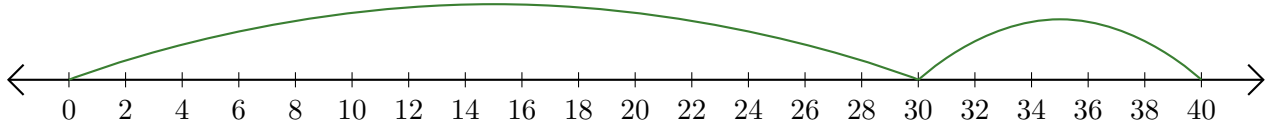
5. $12 + 2 = \underline{\quad}$



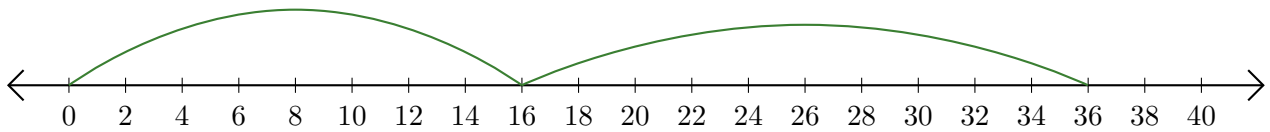
Adding on Number Lines (E) Answers

Use the number lines to calculate each sum.

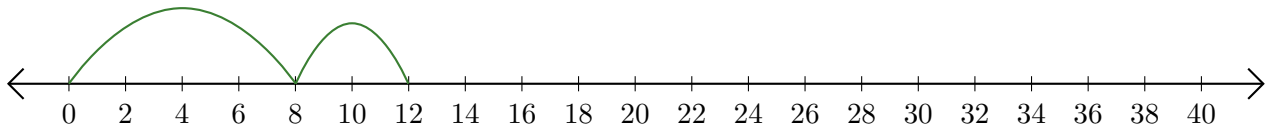
1. $30 + 10 = \underline{40}$



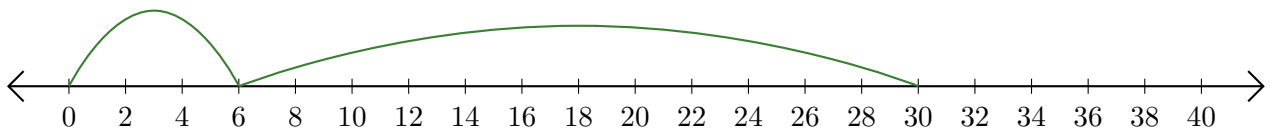
2. $16 + 20 = \underline{36}$



3. $8 + 4 = \underline{12}$



4. $6 + 24 = \underline{30}$



5. $12 + 2 = \underline{14}$

