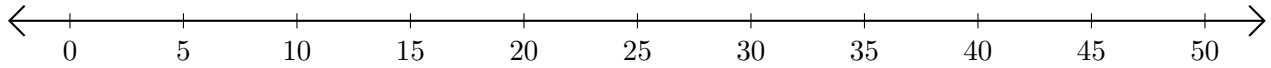


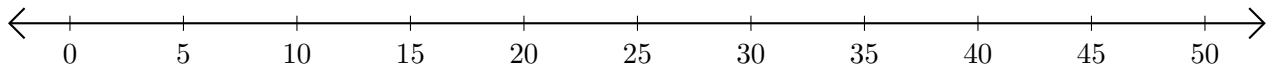
Adding on Number Lines (A)

Use the number lines to calculate each sum.

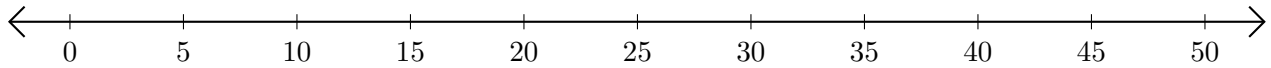
1. $5 + 45 = \underline{\quad}$



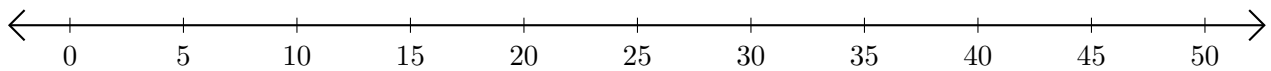
2. $40 + 5 = \underline{\quad}$



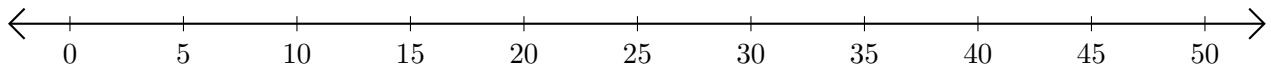
3. $15 + 25 = \underline{\quad}$



4. $35 + 10 = \underline{\quad}$



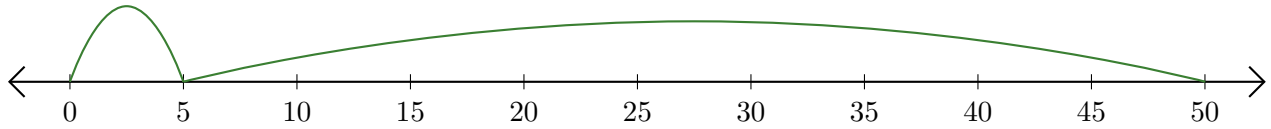
5. $45 + 5 = \underline{\quad}$



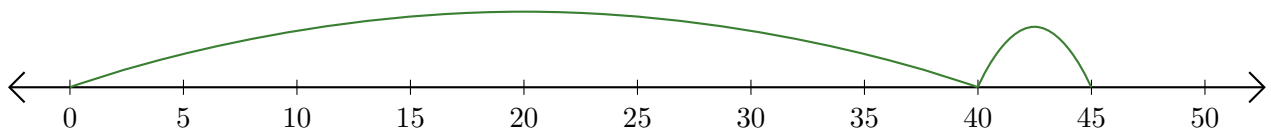
Adding on Number Lines (A) Answers

Use the number lines to calculate each sum.

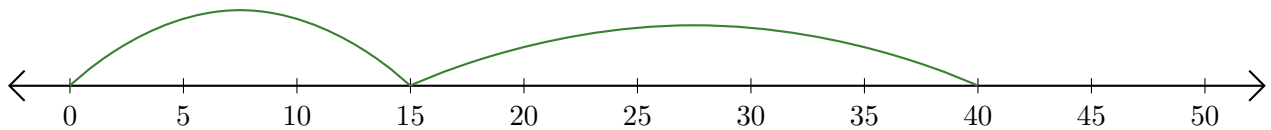
1. $5 + 45 = \underline{50}$



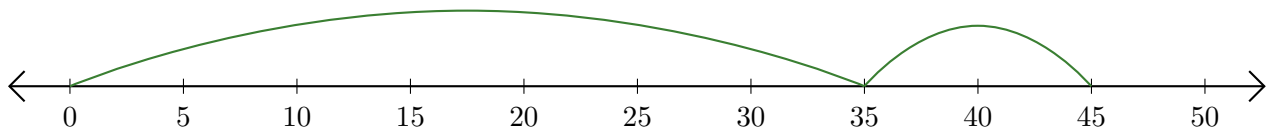
2. $40 + 5 = \underline{45}$



3. $15 + 25 = \underline{40}$



4. $35 + 10 = \underline{45}$



5. $45 + 5 = \underline{50}$

