

# Adding on Number Lines (C)

Use the number lines to calculate each sum.

1.  $40 + 10 = \underline{\quad}$



2.  $35 + 15 = \underline{\quad}$



3.  $25 + 20 = \underline{\quad}$



4.  $20 + 10 = \underline{\quad}$



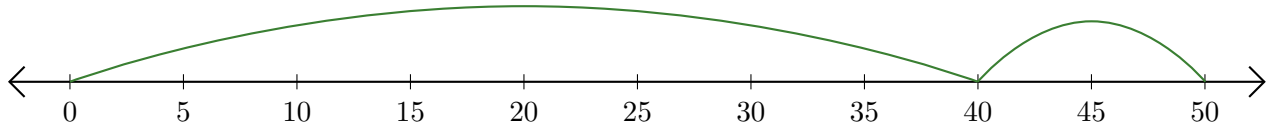
5.  $45 + 5 = \underline{\quad}$



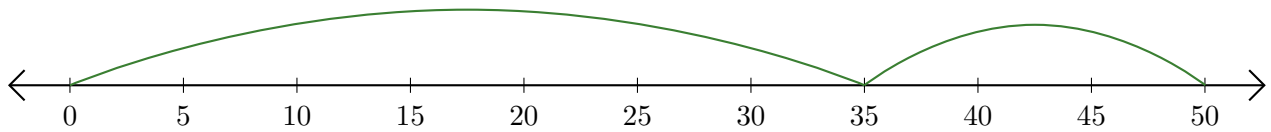
# Adding on Number Lines (C) Answers

Use the number lines to calculate each sum.

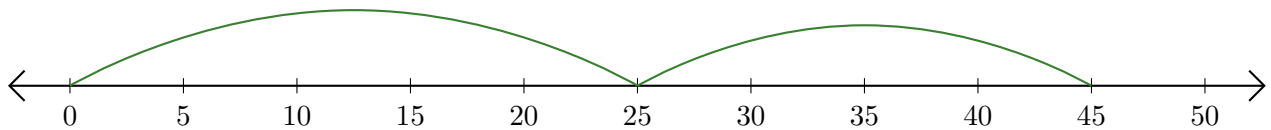
1.  $40 + 10 = \underline{50}$



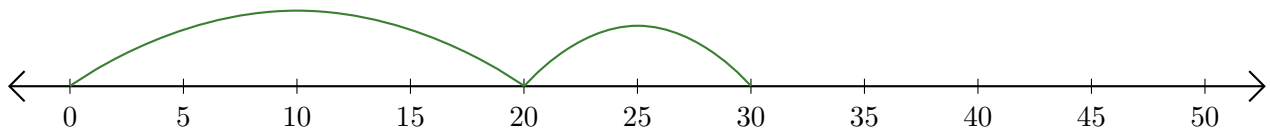
2.  $35 + 15 = \underline{50}$



3.  $25 + 20 = \underline{45}$



4.  $20 + 10 = \underline{30}$



5.  $45 + 5 = \underline{50}$

