

# Adding on Number Lines (D)

Use the number lines to calculate each sum.

1.  $30 + 5 = \underline{\quad}$



2.  $5 + 40 = \underline{\quad}$



3.  $45 + 5 = \underline{\quad}$



4.  $40 + 5 = \underline{\quad}$



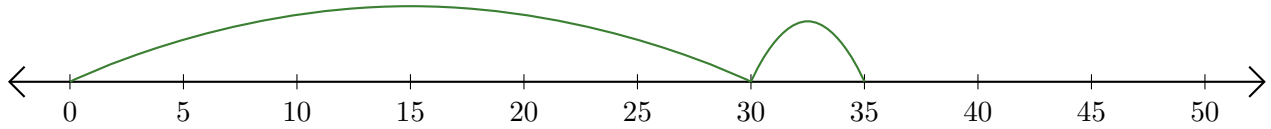
5.  $35 + 10 = \underline{\quad}$



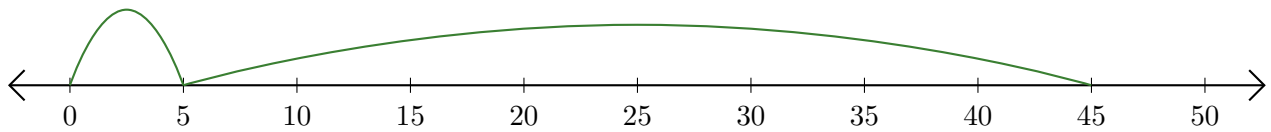
# Adding on Number Lines (D) Answers

Use the number lines to calculate each sum.

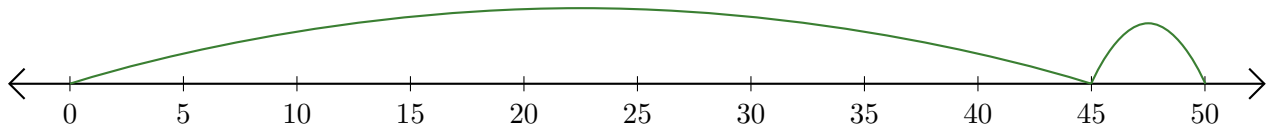
1.  $30 + 5 = \underline{35}$



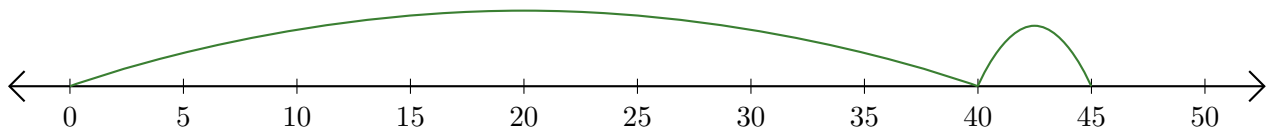
2.  $5 + 40 = \underline{45}$



3.  $45 + 5 = \underline{50}$



4.  $40 + 5 = \underline{45}$



5.  $35 + 10 = \underline{45}$

