

Adding on Number Lines (F)

Use the number lines to calculate each sum.

1. $25 + 20 = \underline{\quad}$



2. $5 + 5 = \underline{\quad}$



3. $40 + 10 = \underline{\quad}$



4. $10 + 30 = \underline{\quad}$



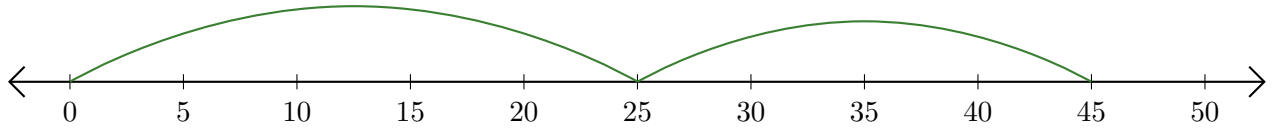
5. $15 + 10 = \underline{\quad}$



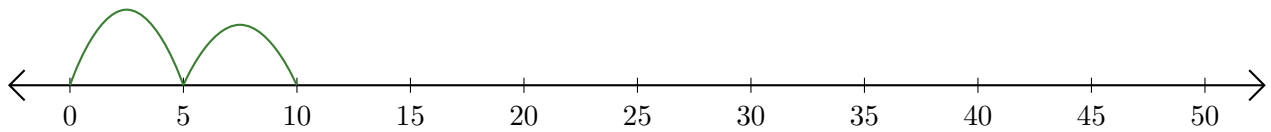
Adding on Number Lines (F) Answers

Use the number lines to calculate each sum.

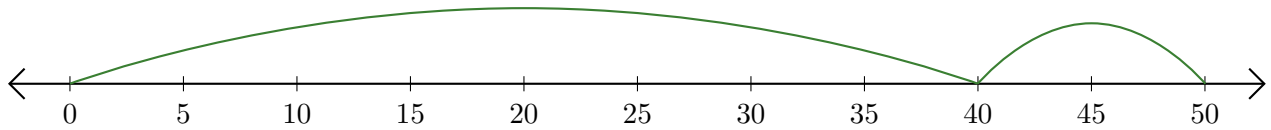
1. $25 + 20 = \underline{45}$



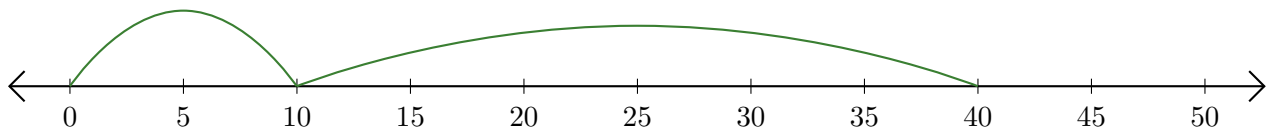
2. $5 + 5 = \underline{10}$



3. $40 + 10 = \underline{50}$



4. $10 + 30 = \underline{40}$



5. $15 + 10 = \underline{25}$

