

# Adding on Number Lines (G)

Use the number lines to calculate each sum.

1.  $35 + 10 = \underline{\quad}$



2.  $30 + 20 = \underline{\quad}$



3.  $20 + 15 = \underline{\quad}$



4.  $10 + 40 = \underline{\quad}$



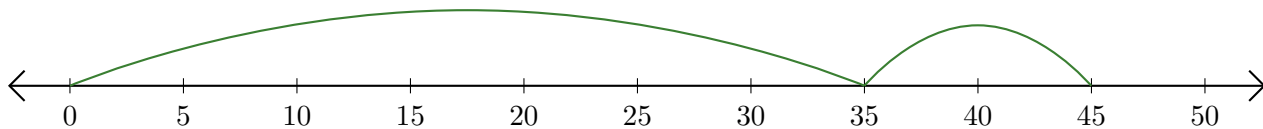
5.  $40 + 5 = \underline{\quad}$



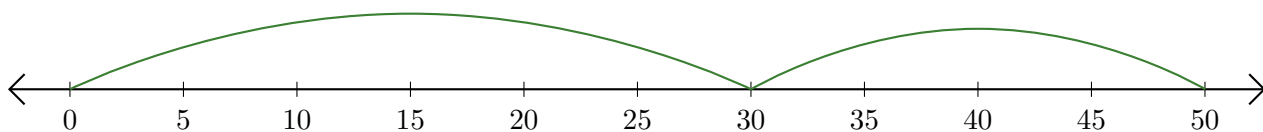
# Adding on Number Lines (G) Answers

Use the number lines to calculate each sum.

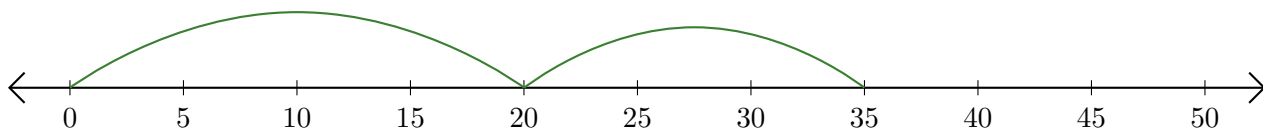
1.  $35 + 10 = \underline{45}$



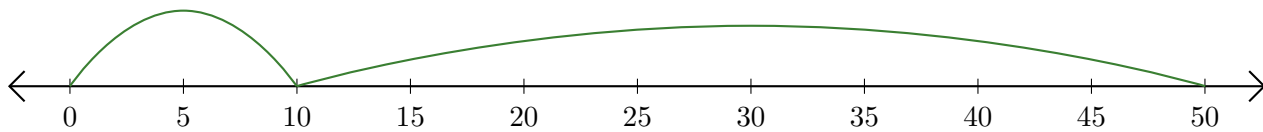
2.  $30 + 20 = \underline{50}$



3.  $20 + 15 = \underline{35}$



4.  $10 + 40 = \underline{50}$



5.  $40 + 5 = \underline{45}$

