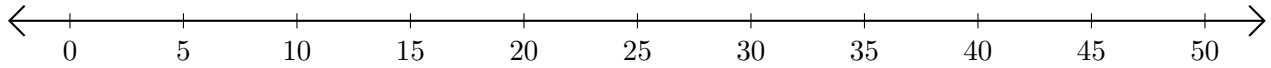


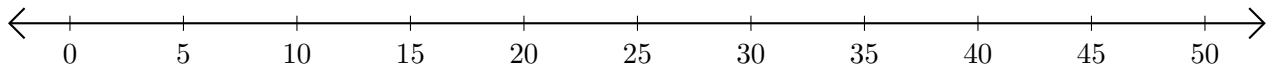
Adding on Number Lines (H)

Use the number lines to calculate each sum.

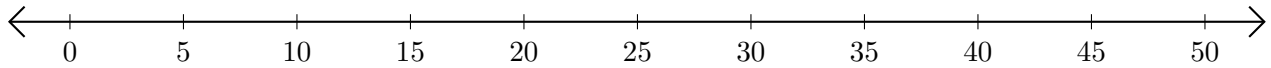
1. $35 + 10 = \underline{\quad}$



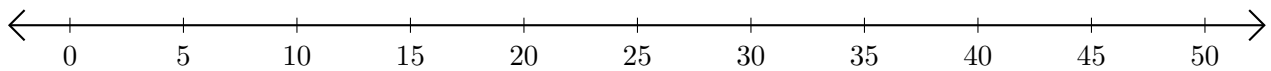
2. $40 + 5 = \underline{\quad}$



3. $10 + 10 = \underline{\quad}$



4. $5 + 15 = \underline{\quad}$



5. $20 + 5 = \underline{\quad}$

