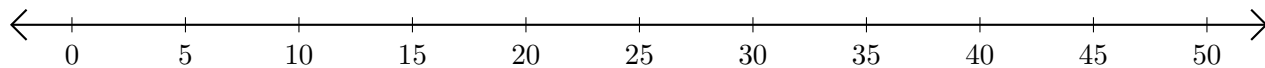


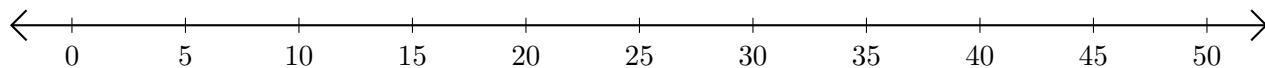
Adding on Number Lines (I)

Use the number lines to calculate each sum.

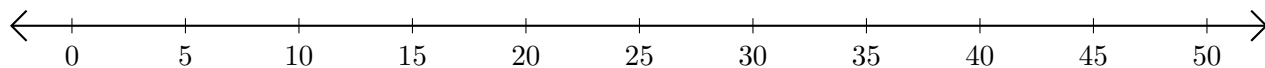
1. $40 + 10 = \underline{\quad}$



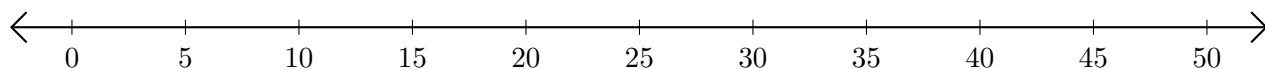
2. $5 + 45 = \underline{\quad}$



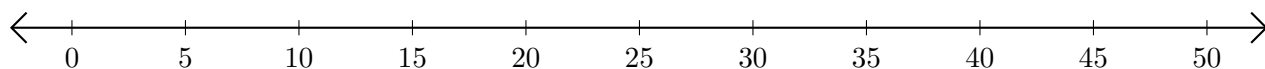
3. $35 + 15 = \underline{\quad}$



4. $30 + 5 = \underline{\quad}$



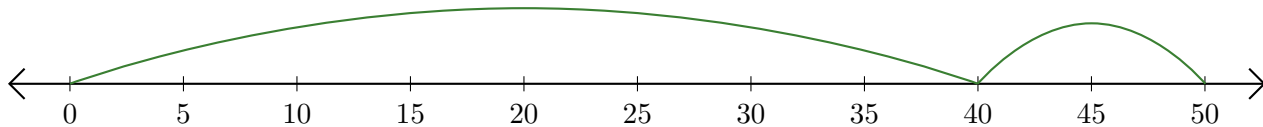
5. $10 + 30 = \underline{\quad}$



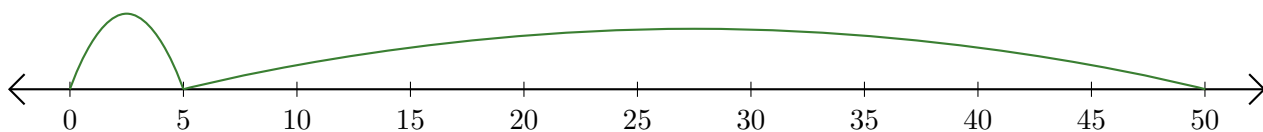
Adding on Number Lines (I) Answers

Use the number lines to calculate each sum.

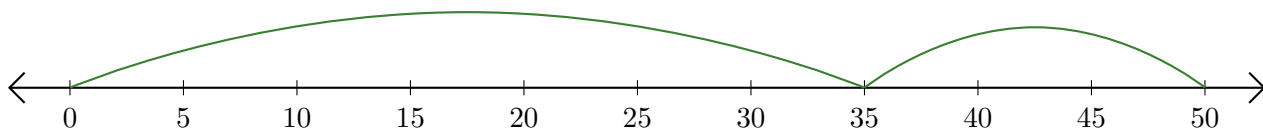
1. $40 + 10 = \underline{50}$



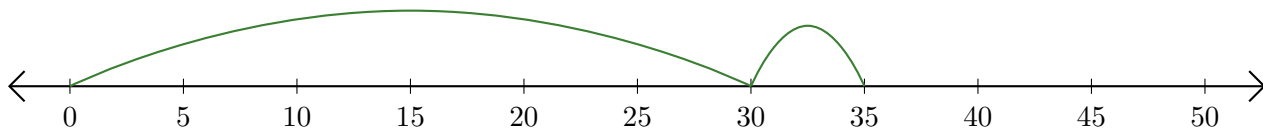
2. $5 + 45 = \underline{50}$



3. $35 + 15 = \underline{50}$



4. $30 + 5 = \underline{35}$



5. $10 + 30 = \underline{40}$

