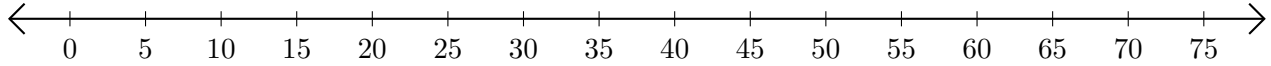


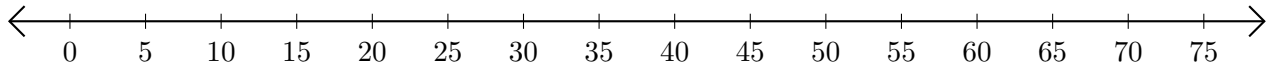
Adding on Number Lines (A)

Use the number lines to calculate each sum.

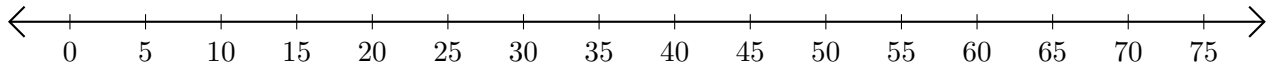
1. $5 + 50 = \underline{\quad}$



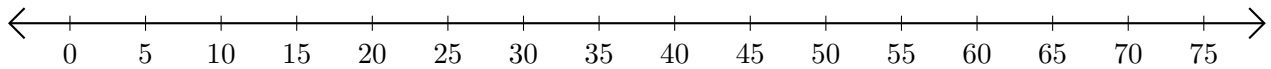
2. $70 + 5 = \underline{\quad}$



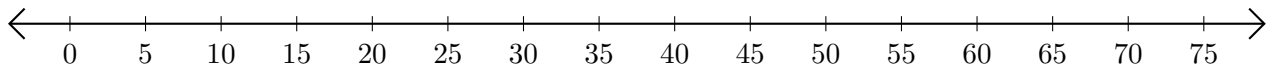
3. $60 + 5 = \underline{\quad}$



4. $25 + 10 = \underline{\quad}$



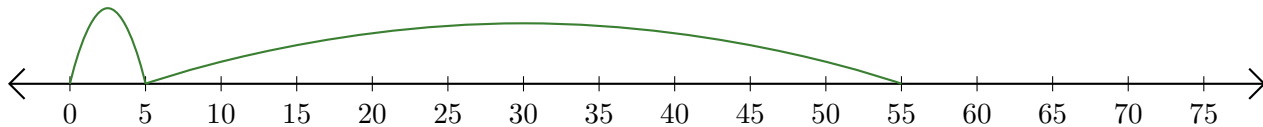
5. $45 + 25 = \underline{\quad}$



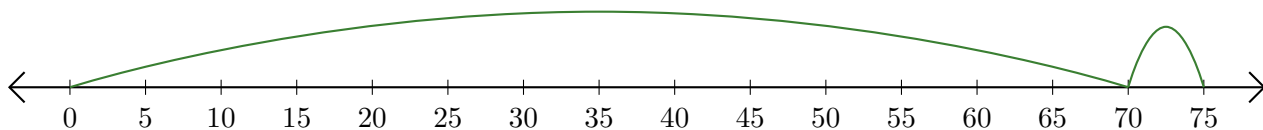
Adding on Number Lines (A) Answers

Use the number lines to calculate each sum.

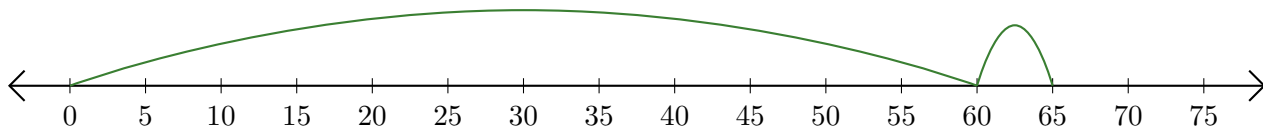
1. $5 + 50 = \underline{55}$



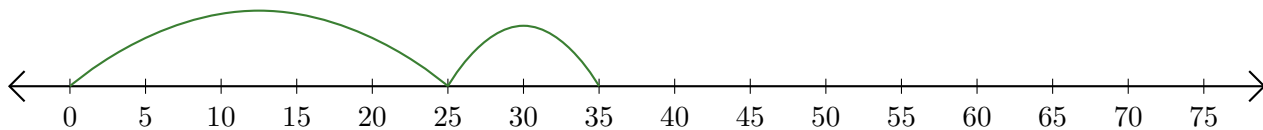
2. $70 + 5 = \underline{75}$



3. $60 + 5 = \underline{65}$



4. $25 + 10 = \underline{35}$



5. $45 + 25 = \underline{70}$

