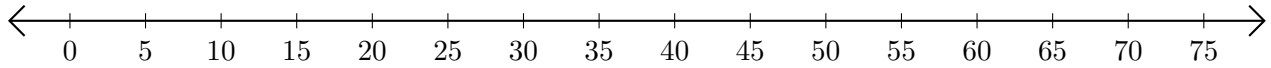


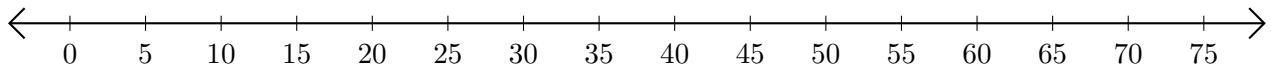
Adding on Number Lines (E)

Use the number lines to calculate each sum.

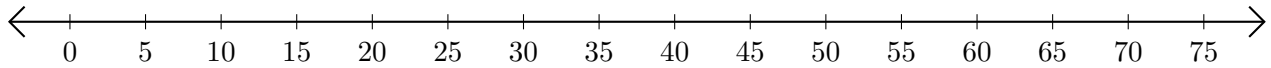
1. $30 + 20 = \underline{\quad}$



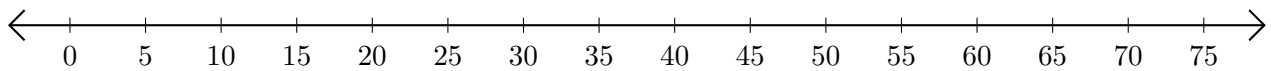
2. $65 + 10 = \underline{\quad}$



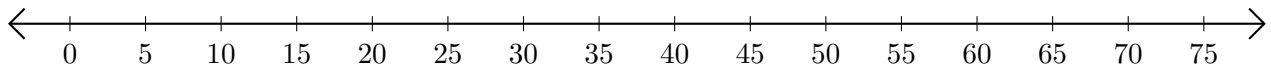
3. $10 + 35 = \underline{\quad}$



4. $35 + 5 = \underline{\quad}$



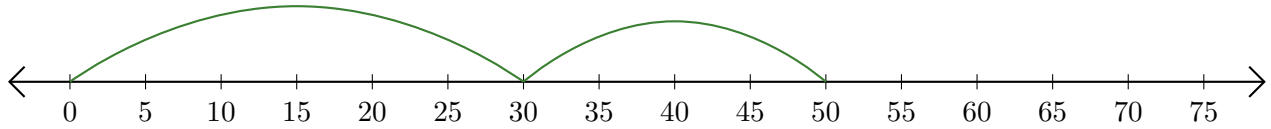
5. $55 + 15 = \underline{\quad}$



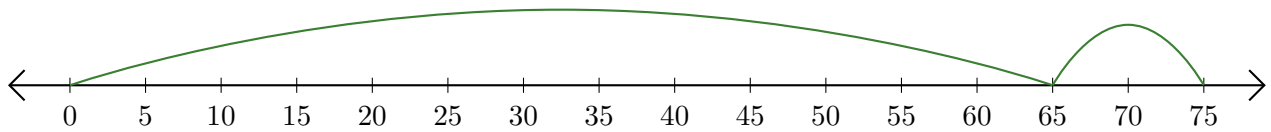
Adding on Number Lines (E) Answers

Use the number lines to calculate each sum.

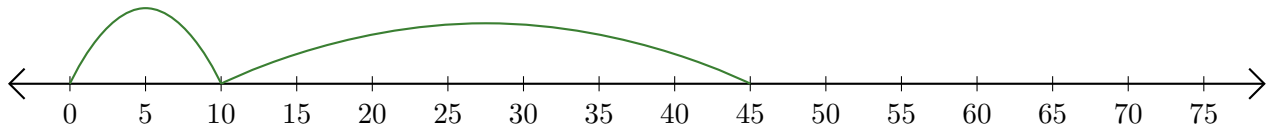
1. $30 + 20 = \underline{50}$



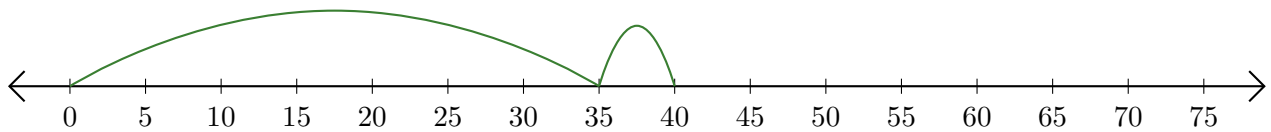
2. $65 + 10 = \underline{75}$



3. $10 + 35 = \underline{45}$



4. $35 + 5 = \underline{40}$



5. $55 + 15 = \underline{70}$

