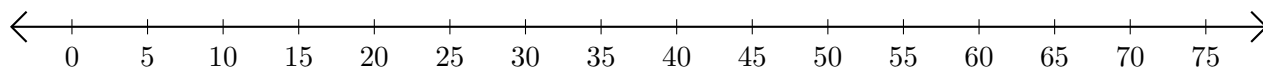


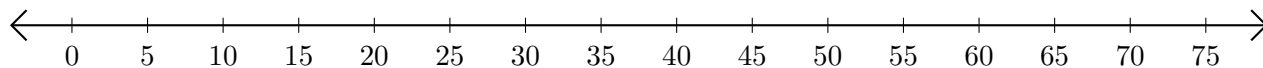
Adding on Number Lines (I)

Use the number lines to calculate each sum.

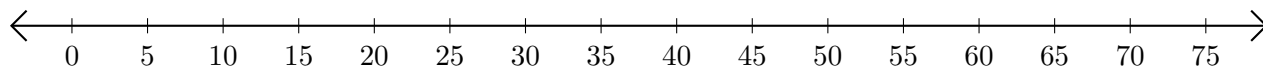
1. $5 + 35 = \underline{\quad}$



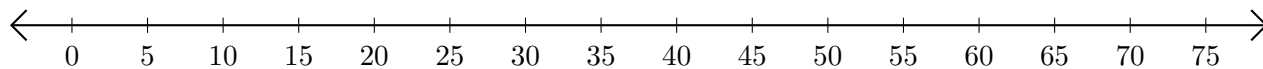
2. $40 + 25 = \underline{\quad}$



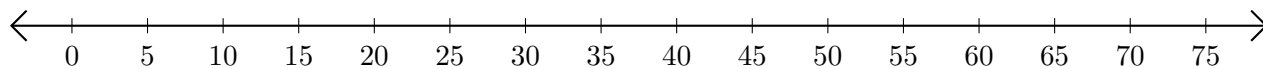
3. $50 + 15 = \underline{\quad}$



4. $10 + 30 = \underline{\quad}$



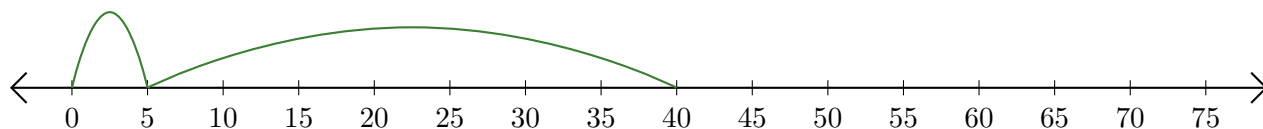
5. $65 + 5 = \underline{\quad}$



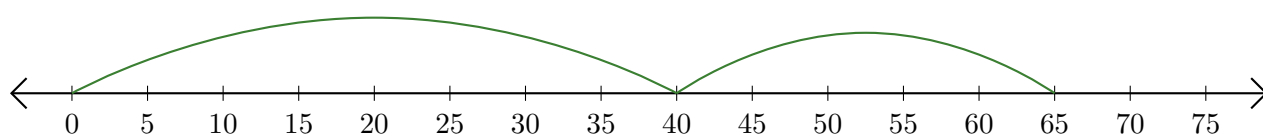
Adding on Number Lines (I) Answers

Use the number lines to calculate each sum.

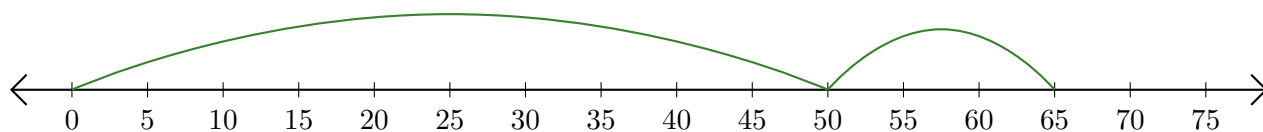
1. $5 + 35 = \underline{40}$



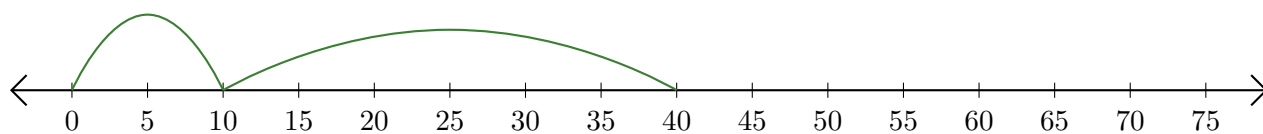
2. $40 + 25 = \underline{65}$



3. $50 + 15 = \underline{65}$



4. $10 + 30 = \underline{40}$



5. $65 + 5 = \underline{70}$

