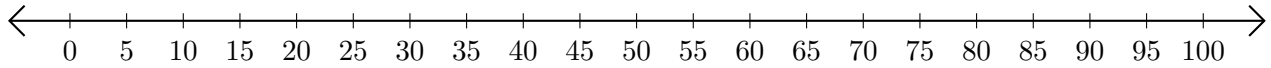


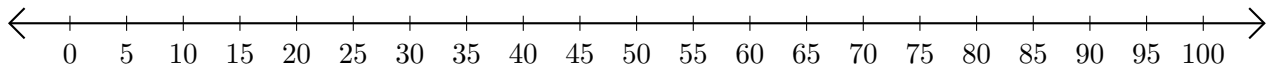
Adding on Number Lines (A)

Use the number lines to calculate each sum.

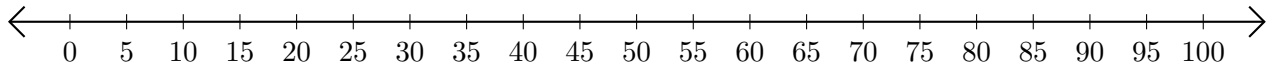
1. $25 + 25 = \underline{\quad}$



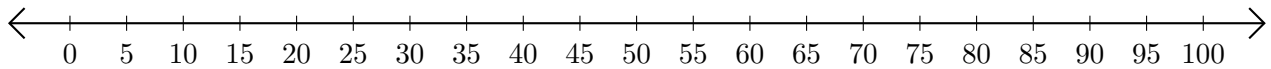
2. $80 + 20 = \underline{\quad}$



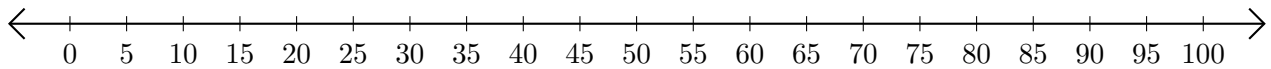
3. $35 + 50 = \underline{\quad}$



4. $20 + 50 = \underline{\quad}$



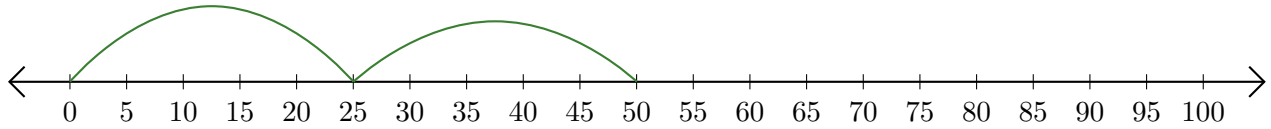
5. $40 + 50 = \underline{\quad}$



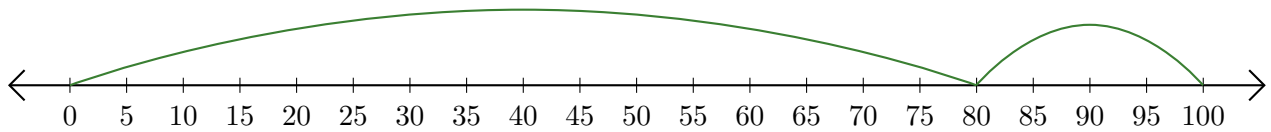
Adding on Number Lines (A) Answers

Use the number lines to calculate each sum.

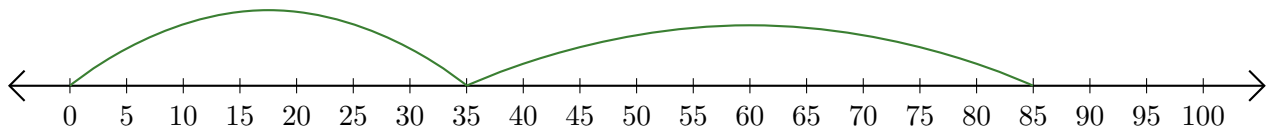
1. $25 + 25 = \underline{50}$



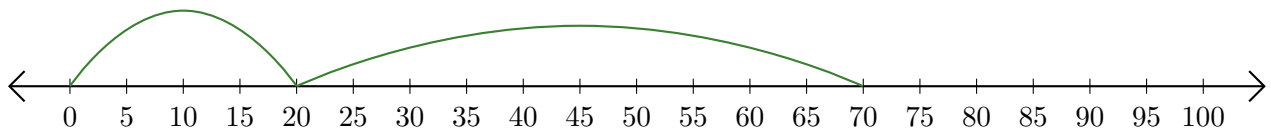
2. $80 + 20 = \underline{100}$



3. $35 + 50 = \underline{85}$



4. $20 + 50 = \underline{70}$



5. $40 + 50 = \underline{90}$

