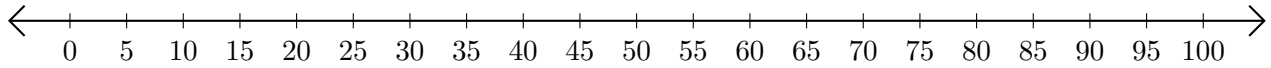


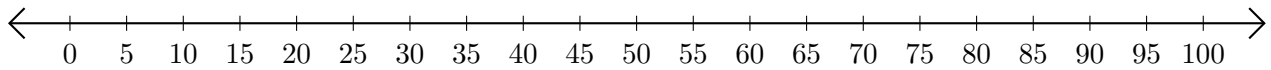
# Adding on Number Lines (A)

Use the number lines to calculate each sum.

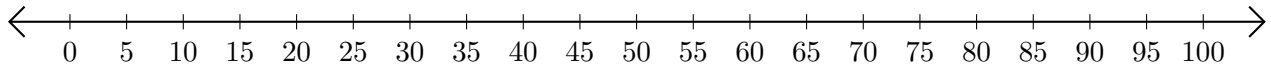
1.  $25 + 25 = \underline{\quad}$



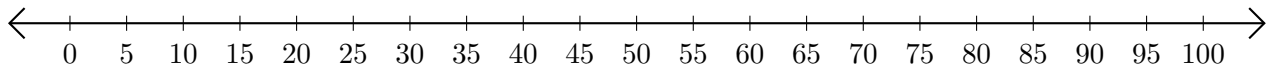
2.  $80 + 20 = \underline{\quad}$



3.  $35 + 50 = \underline{\quad}$



4.  $20 + 50 = \underline{\quad}$



5.  $40 + 50 = \underline{\quad}$

