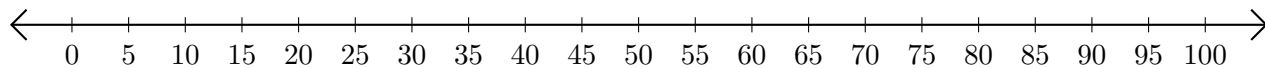


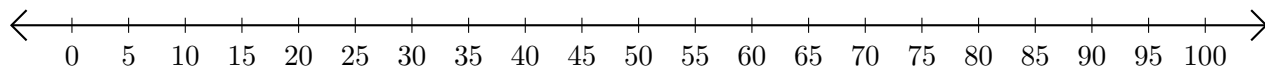
Adding on Number Lines (B)

Use the number lines to calculate each sum.

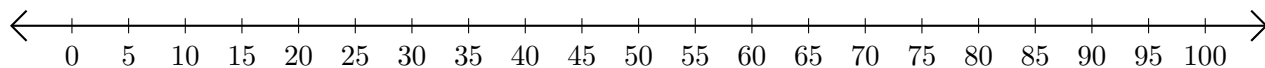
1. $60 + 20 = \underline{\quad}$



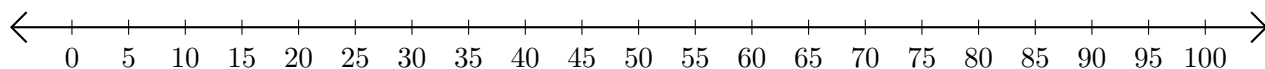
2. $85 + 10 = \underline{\quad}$



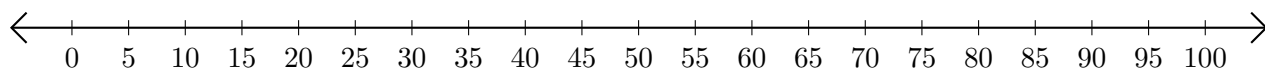
3. $40 + 10 = \underline{\quad}$



4. $55 + 10 = \underline{\quad}$



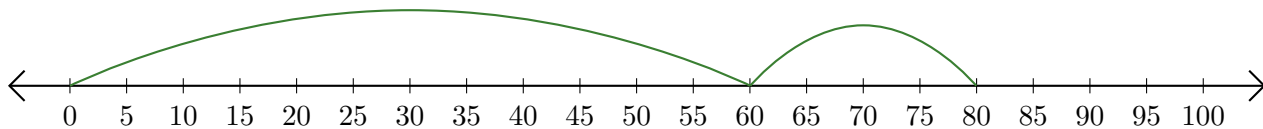
5. $20 + 15 = \underline{\quad}$



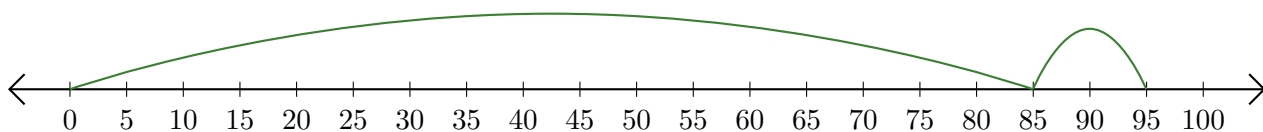
Adding on Number Lines (B) Answers

Use the number lines to calculate each sum.

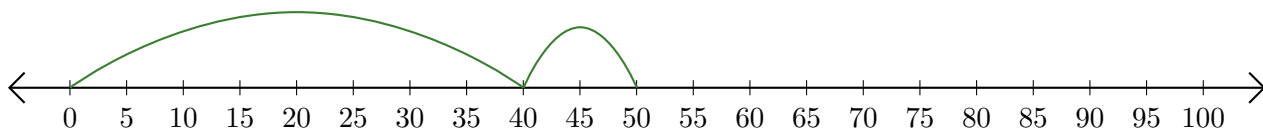
1. $60 + 20 = \underline{80}$



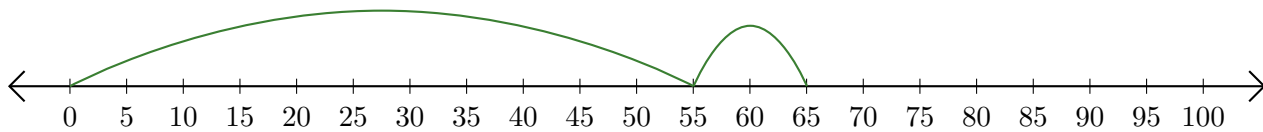
2. $85 + 10 = \underline{95}$



3. $40 + 10 = \underline{50}$



4. $55 + 10 = \underline{65}$



5. $20 + 15 = \underline{35}$

