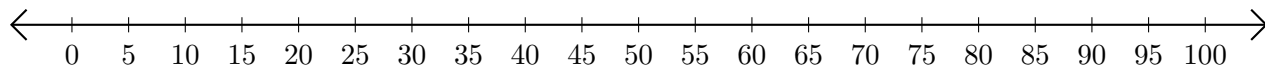


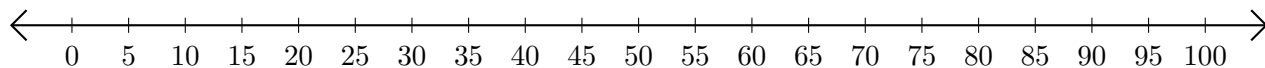
## Adding on Number Lines (B)

Use the number lines to calculate each sum.

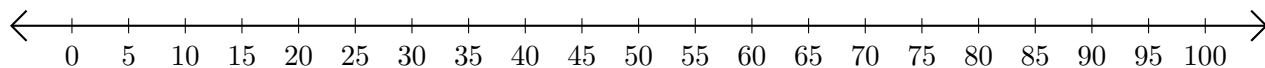
1.  $60 + 20 = \underline{\quad}$



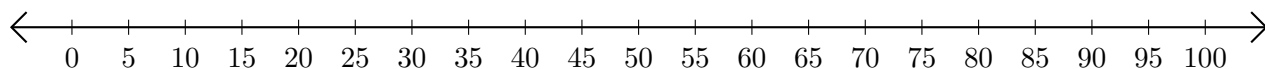
2.  $85 + 10 = \underline{\quad}$



3.  $40 + 10 = \underline{\quad}$



4.  $55 + 10 = \underline{\quad}$



5.  $20 + 15 = \underline{\quad}$

