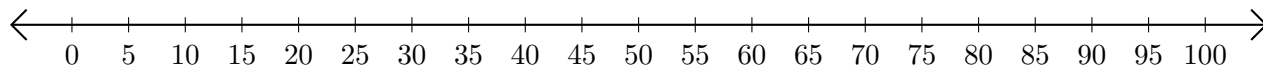


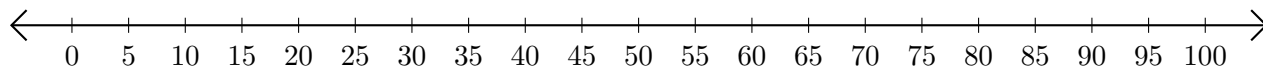
Adding on Number Lines (C)

Use the number lines to calculate each sum.

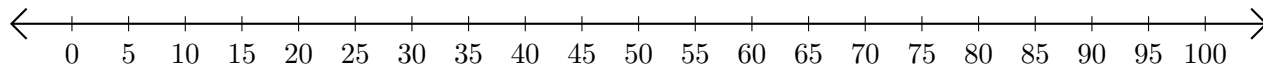
1. $10 + 20 = \underline{\quad}$



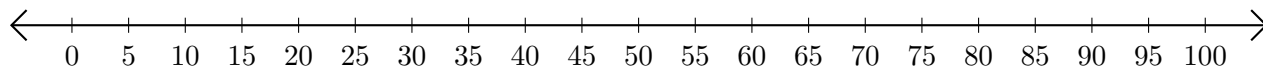
2. $45 + 55 = \underline{\quad}$



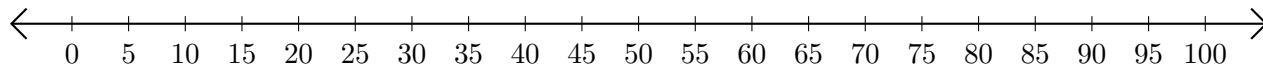
3. $85 + 5 = \underline{\quad}$



4. $60 + 20 = \underline{\quad}$




5. $15 + 25 = \underline{\quad}$



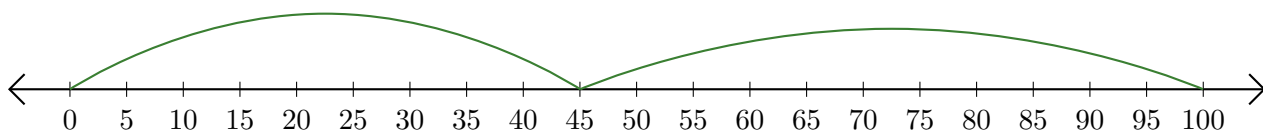
Adding on Number Lines (C) Answers

Use the number lines to calculate each sum.

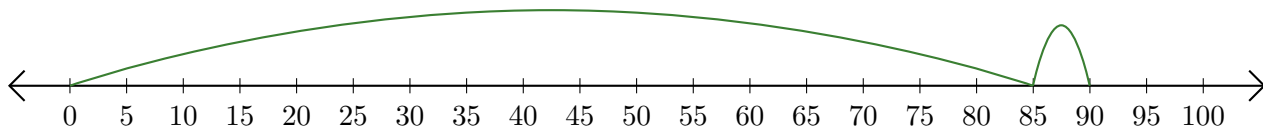
1. $10 + 20 = \underline{30}$



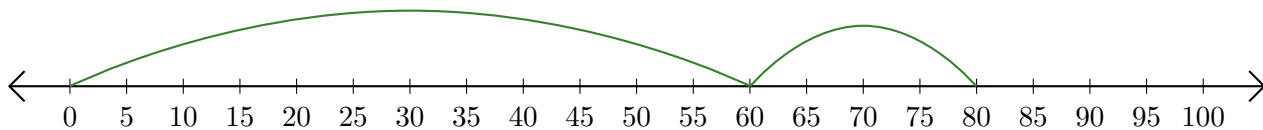
2. $45 + 55 = \underline{100}$



3. $85 + 5 = \underline{90}$



4. $60 + 20 = \underline{80}$



5. $15 + 25 = \underline{40}$

