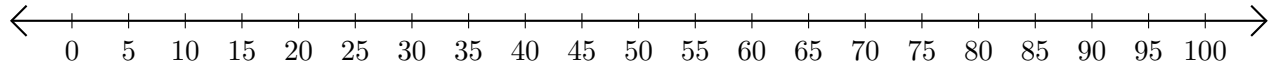


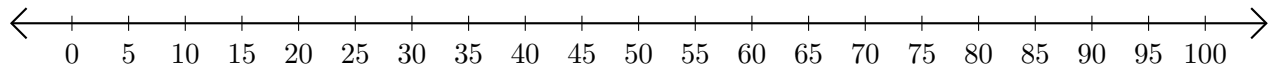
Adding on Number Lines (D)

Use the number lines to calculate each sum.

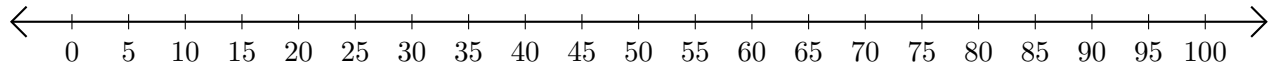
1. $10 + 35 = \underline{\quad}$



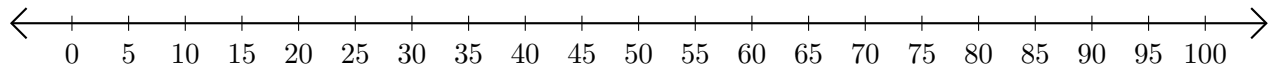
2. $85 + 5 = \underline{\quad}$



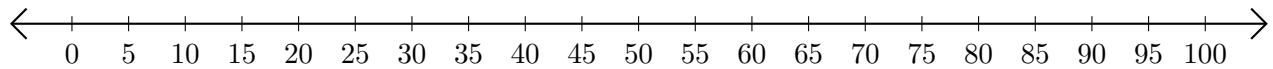
3. $75 + 25 = \underline{\quad}$



4. $15 + 85 = \underline{\quad}$



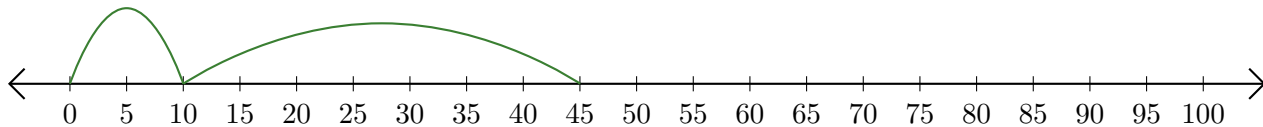
5. $65 + 35 = \underline{\quad}$



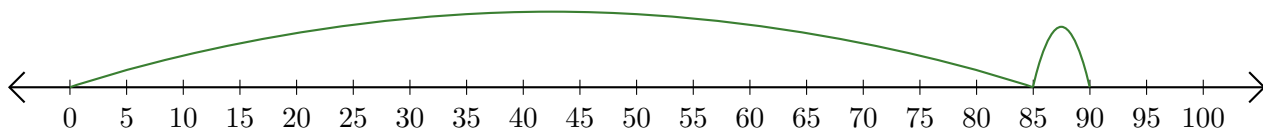
Adding on Number Lines (D) Answers

Use the number lines to calculate each sum.

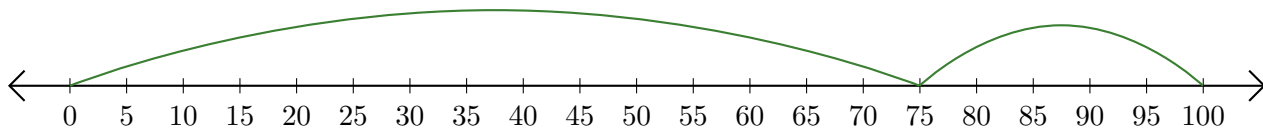
1. $10 + 35 = \underline{45}$



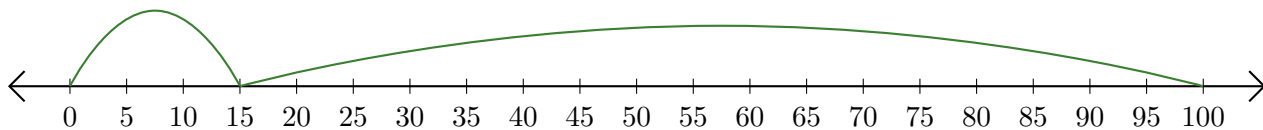
2. $85 + 5 = \underline{90}$



3. $75 + 25 = \underline{100}$



4. $15 + 85 = \underline{100}$



5. $65 + 35 = \underline{100}$

