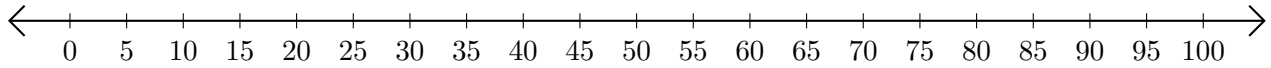


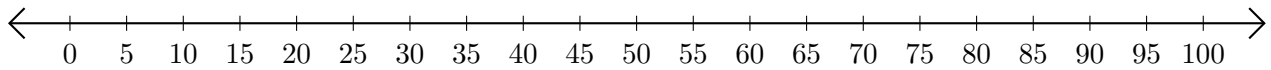
# Adding on Number Lines (D)

Use the number lines to calculate each sum.

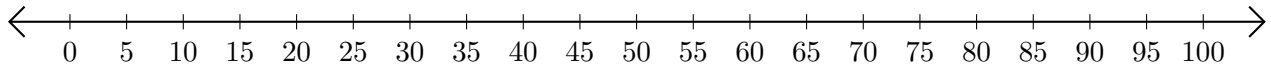
1.  $10 + 35 = \underline{\quad}$



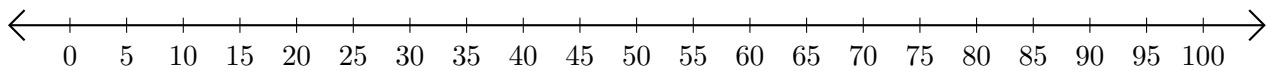
2.  $85 + 5 = \underline{\quad}$



3.  $75 + 25 = \underline{\quad}$



4.  $15 + 85 = \underline{\quad}$



5.  $65 + 35 = \underline{\quad}$

