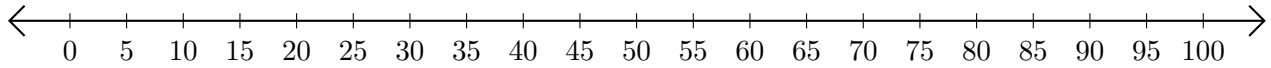


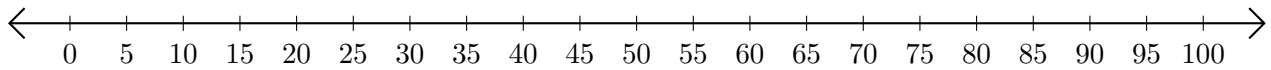
Adding on Number Lines (E)

Use the number lines to calculate each sum.

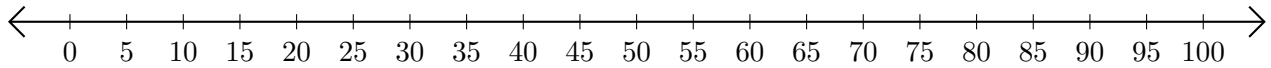
1. $5 + 10 = \underline{\quad}$



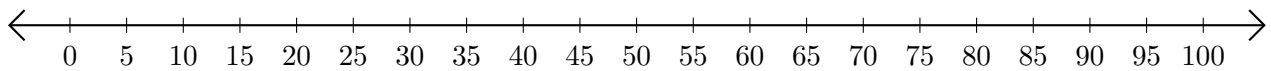
2. $65 + 25 = \underline{\quad}$



3. $90 + 5 = \underline{\quad}$



4. $40 + 35 = \underline{\quad}$



5. $60 + 5 = \underline{\quad}$

