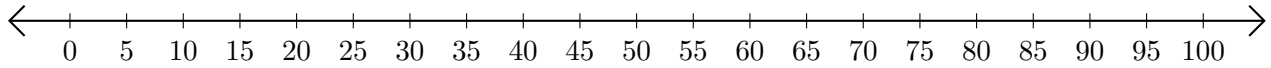


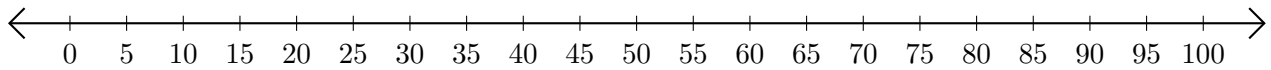
Adding on Number Lines (F)

Use the number lines to calculate each sum.

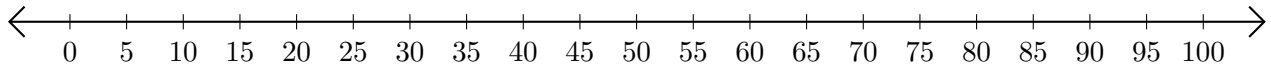
1. $35 + 65 = \underline{\quad}$



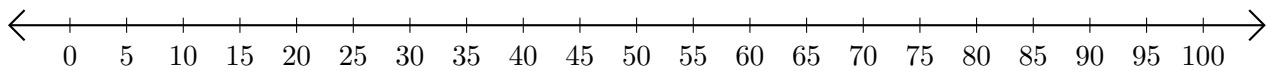
2. $5 + 85 = \underline{\quad}$



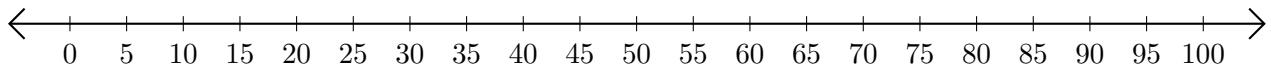
3. $25 + 45 = \underline{\quad}$



4. $20 + 10 = \underline{\quad}$



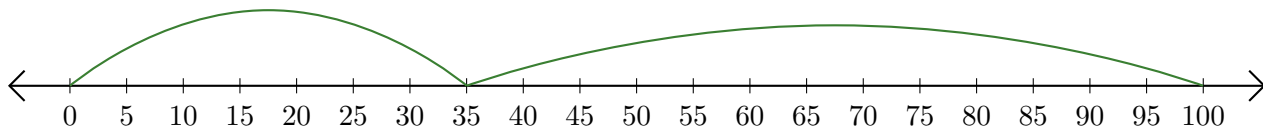
5. $40 + 25 = \underline{\quad}$



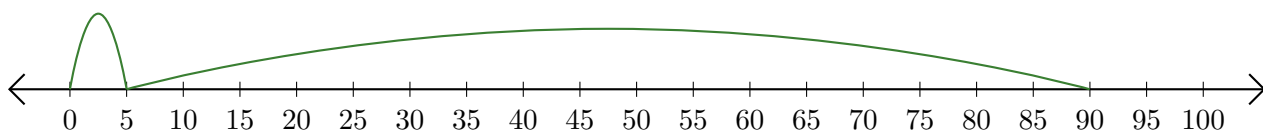
Adding on Number Lines (F) Answers

Use the number lines to calculate each sum.

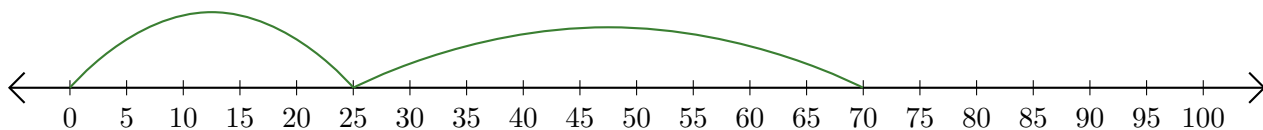
1. $35 + 65 = \underline{100}$



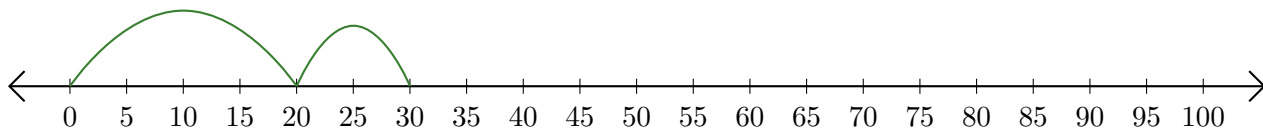
2. $5 + 85 = \underline{90}$



3. $25 + 45 = \underline{70}$



4. $20 + 10 = \underline{30}$



5. $40 + 25 = \underline{65}$

