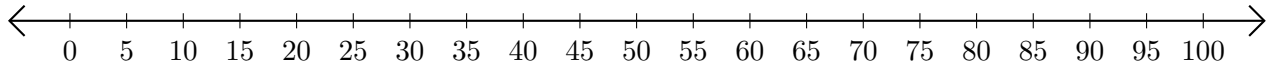


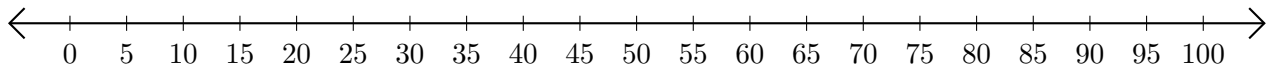
# Adding on Number Lines (G)

Use the number lines to calculate each sum.

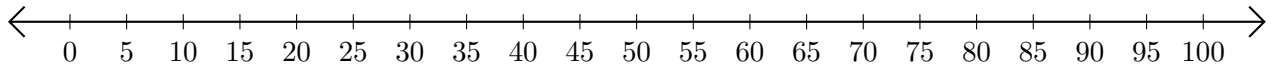
1.  $35 + 50 = \underline{\quad}$



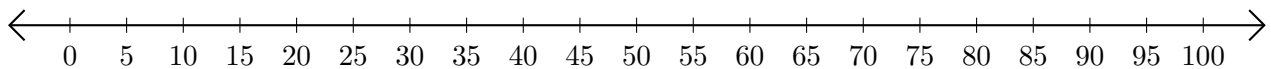
2.  $20 + 25 = \underline{\quad}$



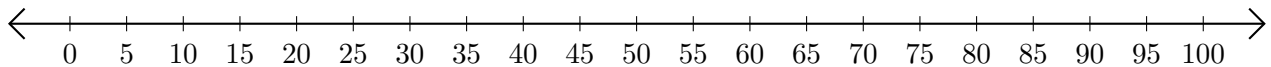
3.  $60 + 30 = \underline{\quad}$



4.  $95 + 5 = \underline{\quad}$



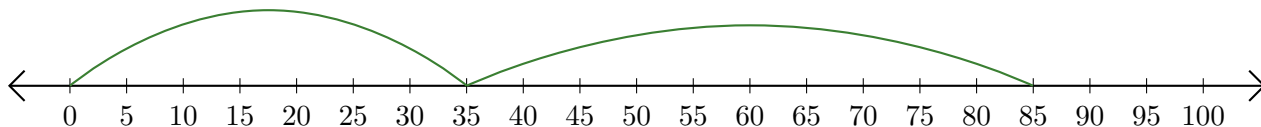
5.  $25 + 5 = \underline{\quad}$



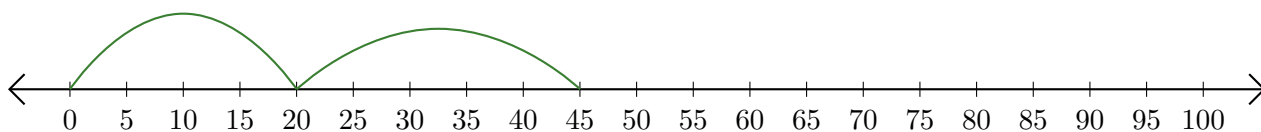
# Adding on Number Lines (G) Answers

Use the number lines to calculate each sum.

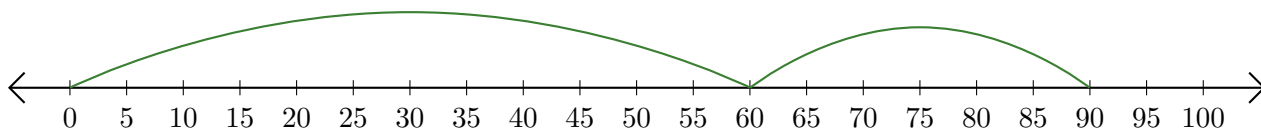
1.  $35 + 50 = \underline{85}$



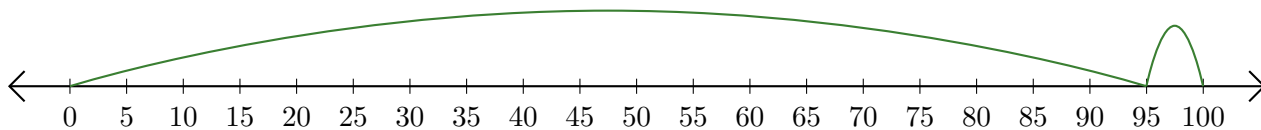
2.  $20 + 25 = \underline{45}$



3.  $60 + 30 = \underline{90}$



4.  $95 + 5 = \underline{100}$



5.  $25 + 5 = \underline{30}$

