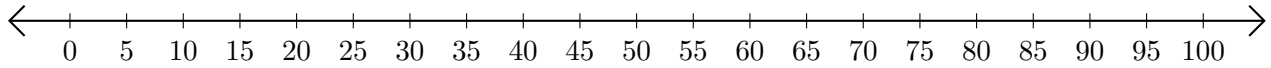


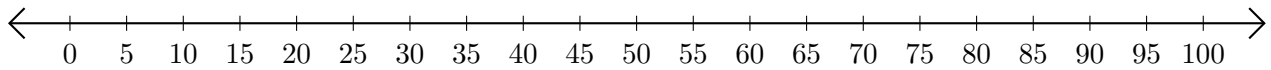
Adding on Number Lines (G)

Use the number lines to calculate each sum.

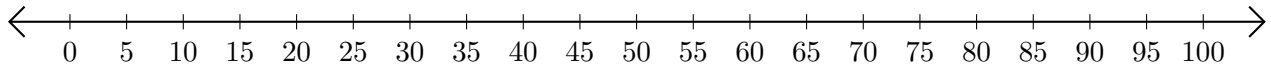
1. $35 + 50 = \underline{\quad}$



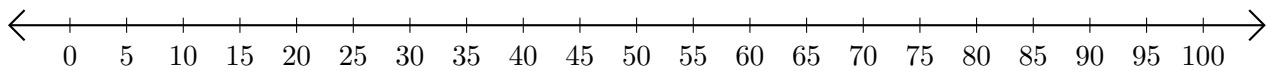
2. $20 + 25 = \underline{\quad}$



3. $60 + 30 = \underline{\quad}$



4. $95 + 5 = \underline{\quad}$



5. $25 + 5 = \underline{\quad}$

