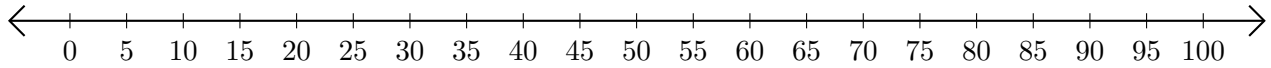


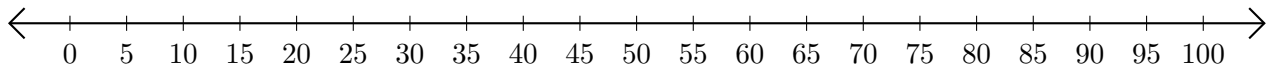
# Adding on Number Lines (J)

Use the number lines to calculate each sum.

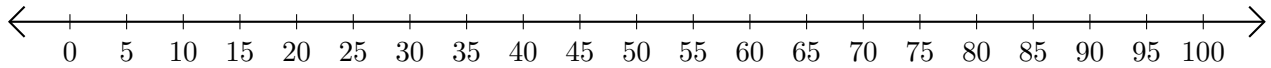
1.  $45 + 30 = \underline{\quad}$



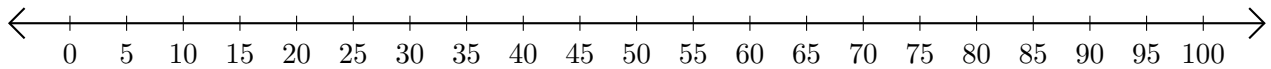
2.  $70 + 25 = \underline{\quad}$



3.  $40 + 60 = \underline{\quad}$



4.  $15 + 5 = \underline{\quad}$



5.  $60 + 5 = \underline{\quad}$

