

Adding on Number Lines (C)

Use the number lines to calculate each sum.

1. $90 + 10 = \underline{\quad}$



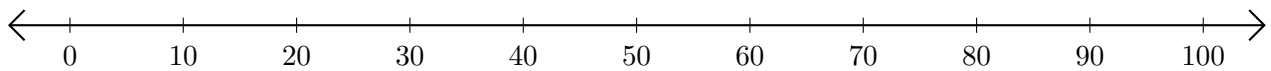
2. $70 + 10 = \underline{\quad}$



3. $40 + 20 = \underline{\quad}$



4. $80 + 10 = \underline{\quad}$



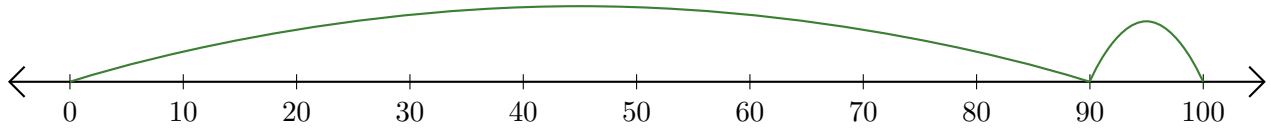
5. $60 + 20 = \underline{\quad}$



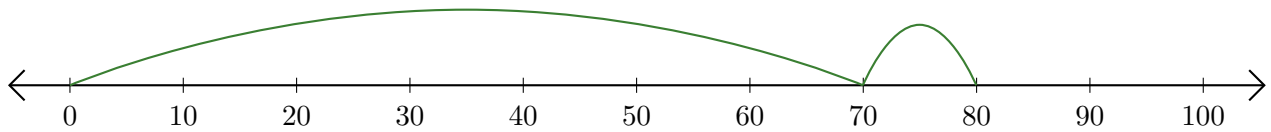
Adding on Number Lines (C) Answers

Use the number lines to calculate each sum.

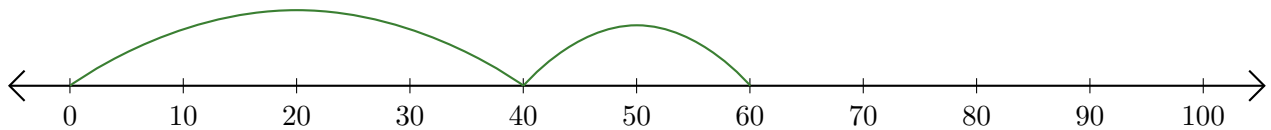
1. $90 + 10 = \underline{100}$



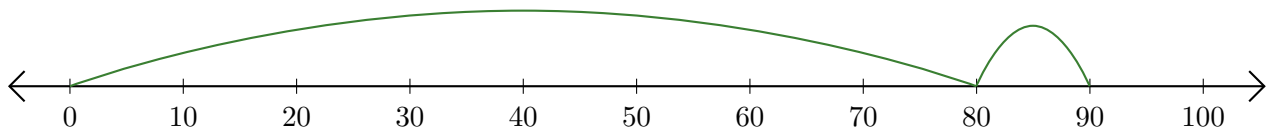
2. $70 + 10 = \underline{80}$



3. $40 + 20 = \underline{60}$



4. $80 + 10 = \underline{90}$



5. $60 + 20 = \underline{80}$

