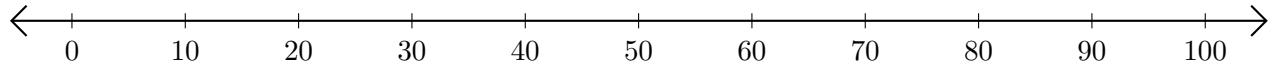


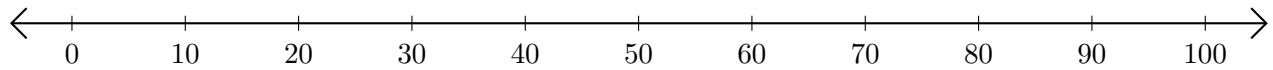
Adding on Number Lines (D)

Use the number lines to calculate each sum.

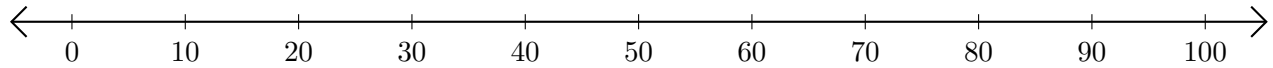
1. $70 + 10 = \underline{\quad}$



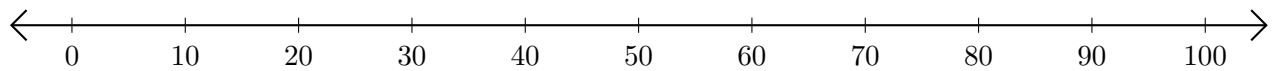
2. $90 + 10 = \underline{\quad}$



3. $30 + 50 = \underline{\quad}$



4. $40 + 60 = \underline{\quad}$



5. $10 + 30 = \underline{\quad}$

