

# Adding on Number Lines (H)

Use the number lines to calculate each sum.

1.  $60 + 20 = \underline{\quad}$



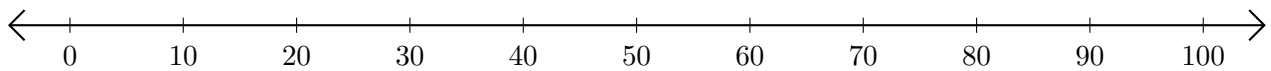
2.  $30 + 60 = \underline{\quad}$



3.  $70 + 30 = \underline{\quad}$



4.  $40 + 60 = \underline{\quad}$



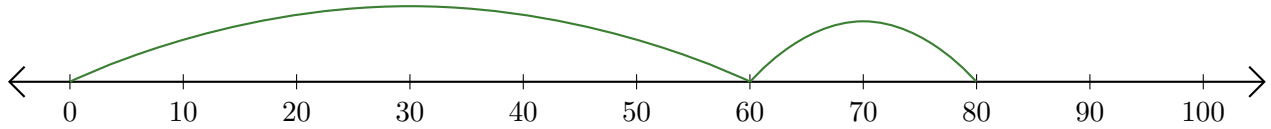
5.  $80 + 20 = \underline{\quad}$



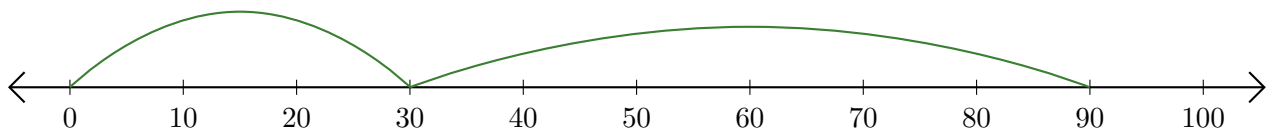
# Adding on Number Lines (H) Answers

Use the number lines to calculate each sum.

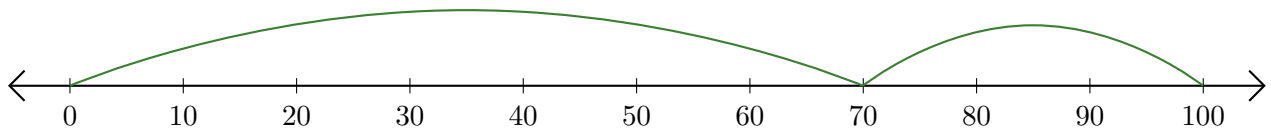
1.  $60 + 20 = \underline{80}$



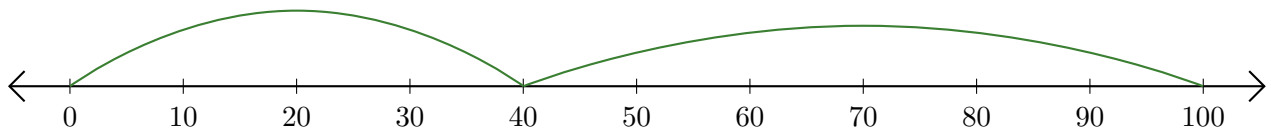
2.  $30 + 60 = \underline{90}$



3.  $70 + 30 = \underline{100}$



4.  $40 + 60 = \underline{100}$



5.  $80 + 20 = \underline{100}$

