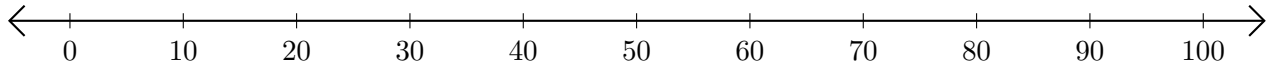


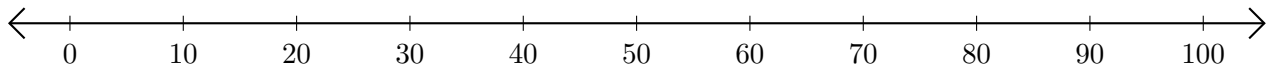
Adding on Number Lines (H)

Use the number lines to calculate each sum.

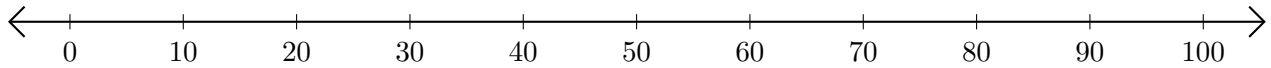
1. $60 + 20 = \underline{\quad}$



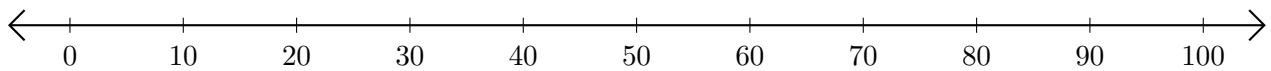
2. $30 + 60 = \underline{\quad}$



3. $70 + 30 = \underline{\quad}$



4. $40 + 60 = \underline{\quad}$



5. $80 + 20 = \underline{\quad}$

