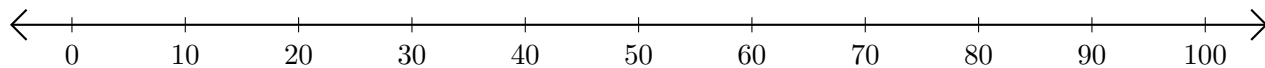


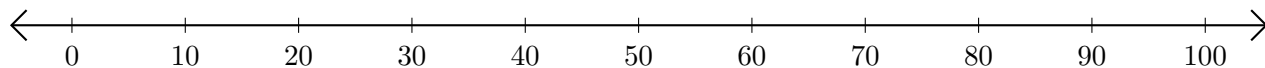
# Adding on Number Lines (I)

Use the number lines to calculate each sum.

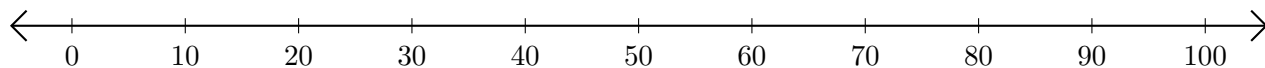
1.  $80 + 20 = \underline{\hspace{2cm}}$



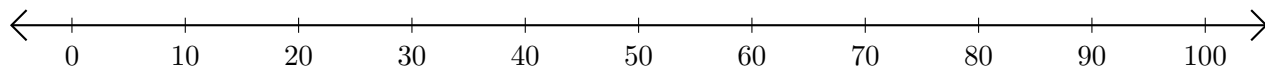
2.  $90 + 10 = \underline{\hspace{2cm}}$



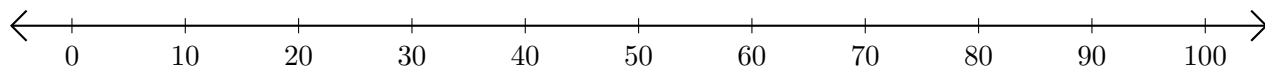
3.  $30 + 50 = \underline{\hspace{2cm}}$



4.  $40 + 60 = \underline{\hspace{2cm}}$



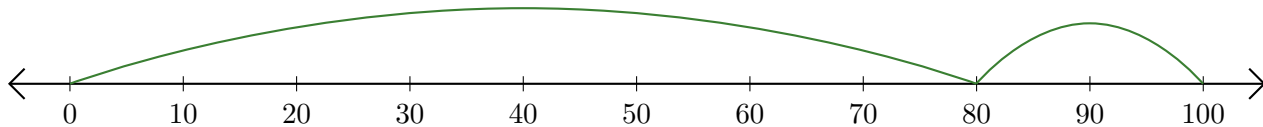
5.  $70 + 20 = \underline{\hspace{2cm}}$



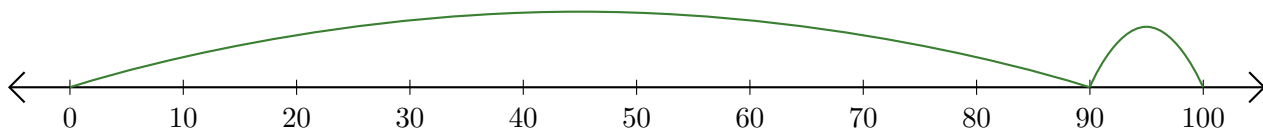
# Adding on Number Lines (I) Answers

Use the number lines to calculate each sum.

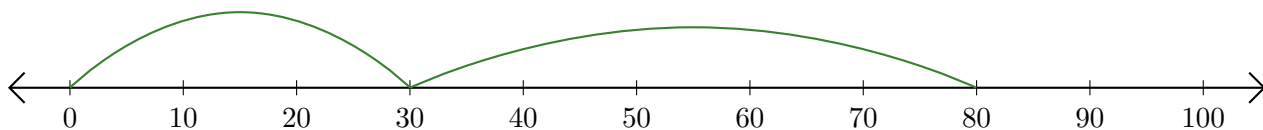
1.  $80 + 20 = \underline{100}$



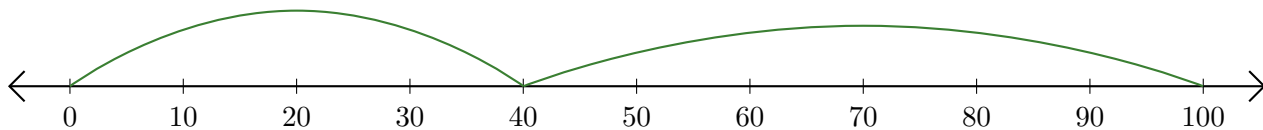
2.  $90 + 10 = \underline{100}$



3.  $30 + 50 = \underline{80}$



4.  $40 + 60 = \underline{100}$



5.  $70 + 20 = \underline{90}$

