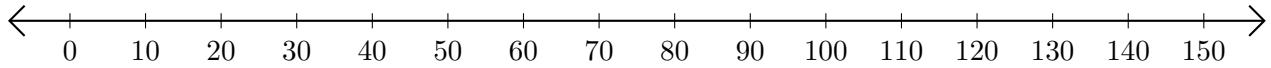


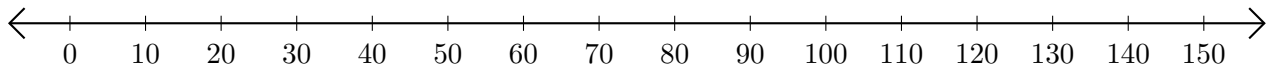
# Adding on Number Lines (A)

Use the number lines to calculate each sum.

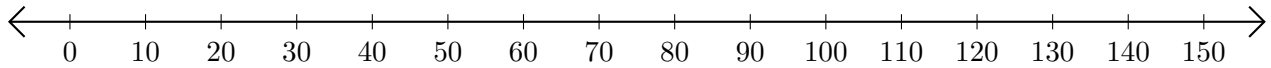
1.  $90 + 20 = \underline{\hspace{2cm}}$



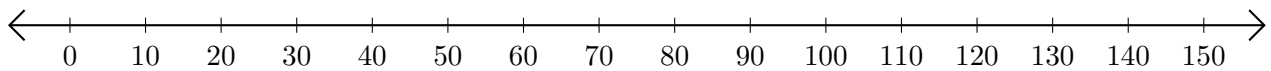
2.  $120 + 30 = \underline{\hspace{2cm}}$



3.  $60 + 10 = \underline{\hspace{2cm}}$



4.  $40 + 90 = \underline{\hspace{2cm}}$



5.  $100 + 30 = \underline{\hspace{2cm}}$

