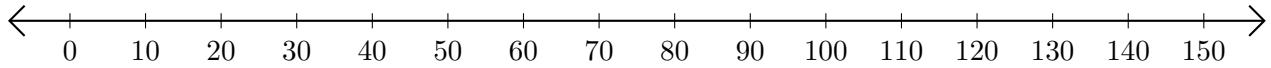


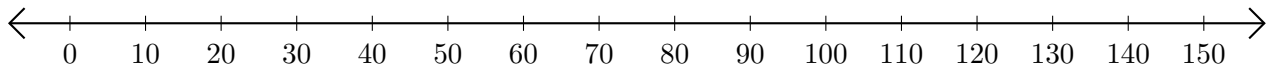
Adding on Number Lines (H)

Use the number lines to calculate each sum.

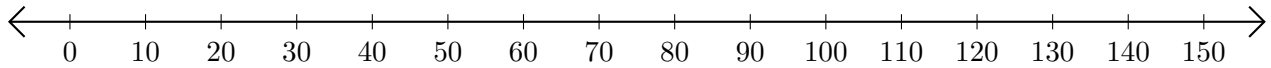
1. $140 + 10 = \underline{\hspace{2cm}}$



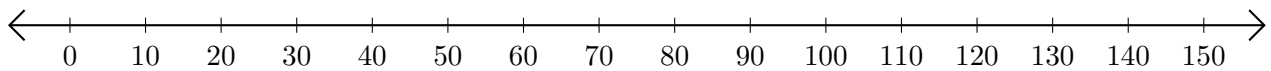
2. $50 + 30 = \underline{\hspace{2cm}}$



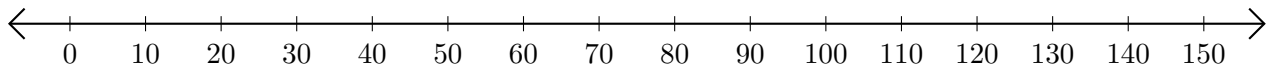
3. $90 + 20 = \underline{\hspace{2cm}}$



4. $40 + 80 = \underline{\hspace{2cm}}$



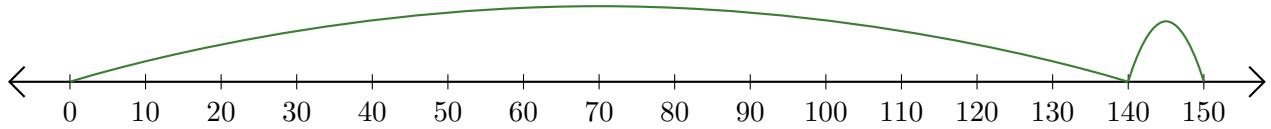
5. $10 + 50 = \underline{\hspace{2cm}}$



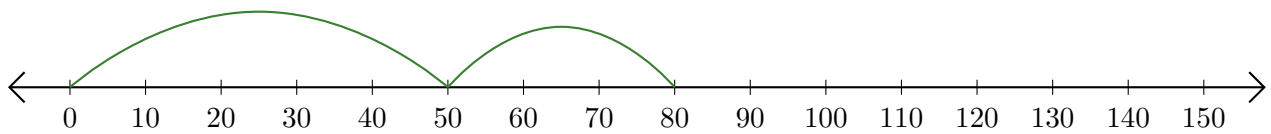
Adding on Number Lines (H) Answers

Use the number lines to calculate each sum.

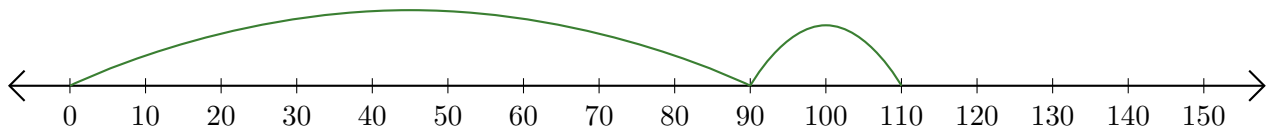
1. $140 + 10 = \underline{150}$



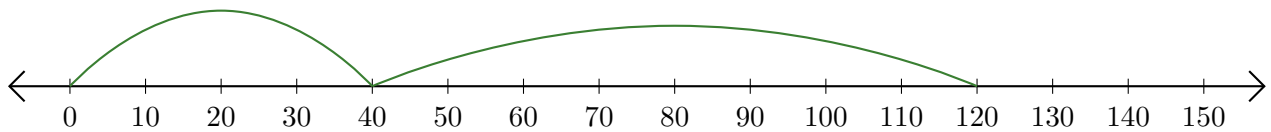
2. $50 + 30 = \underline{80}$



3. $90 + 20 = \underline{110}$



4. $40 + 80 = \underline{120}$



5. $10 + 50 = \underline{60}$

